




Addition





0119CH03

One more




One little parrot,
singing I love you,
One more joins in,
making them two.

Two little parrots,
resting on a tree,
One more joins in,
making them three.



Three little parrots,
looking for more,
One more joins in,
making them four.

Four little parrots,
wanting to dive,
One more joins in,
making them five.




Teachers Note


Refer to page no. 139 to develop understanding of addition.



How many altogether ?





2 cows and




1 cow

is equal to

3 cows



3 children and




2 children is equal to

5 children




Flowers and



Flowers

=



Flowers



Birds and






Birds



=








Birds

How many altogether?

				
6	and	2	=	8

				
<input type="text"/>	and	<input type="text"/>	=	<input type="text"/>




				
<input type="text"/>	and	<input type="text"/>	=	<input type="text"/>



				
<input type="text"/>	and	<input type="text"/>	=	<input type="text"/>

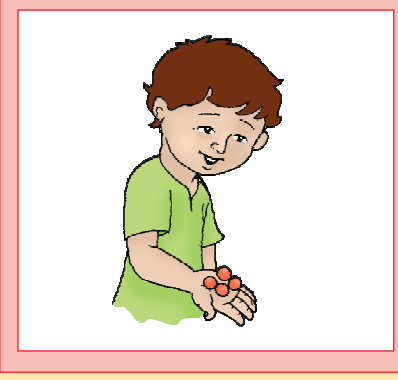

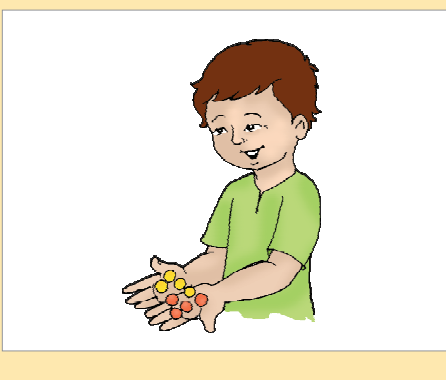




How many altogether?


				
4	+	3	=	7

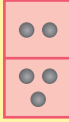
				
<input type="text"/>	+	<input type="text"/>	=	<input type="text"/>

				
<input type="text"/>	+	<input type="text"/>	=	<input type="text"/>





Addition




$$2 + 3 = 5$$




$$\begin{array}{r} 2 \\ + 3 \\ \hline 5 \end{array}$$



 $4 + 2 = \square$


$5 + 1 = \square$



 $3 + 6 = \square$


$7 + 0 = \square$


 $0 + 9 = \square$






$$\begin{array}{r} 4 \\ + 2 \\ \hline \square \end{array}$$



$$\begin{array}{r} 5 \\ + 1 \\ \hline \square \end{array}$$



$$\begin{array}{r} 3 \\ + 6 \\ \hline \square \end{array}$$

$$\begin{array}{r} 7 \\ + 0 \\ \hline \square \end{array}$$





$$\begin{array}{r} 0 \\ + 9 \\ \hline \square \end{array}$$








Addition




$$3 + 2 = \boxed{5} \text{ balloons}$$




$$3 + 0 = \boxed{3} \text{ balloons}$$




$$0 + 2 = \boxed{}$$



$$4 + 0 = \boxed{}$$



$$5 + 0 = \boxed{}$$




$$3 + 4 = \boxed{}$$






Addition



3





4

+

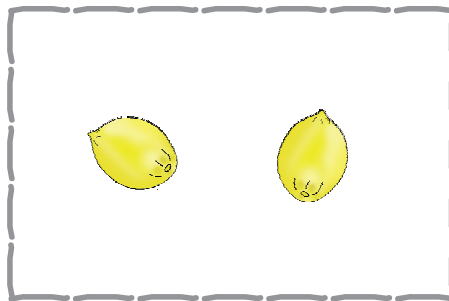

=

7





+

=



+

=



+

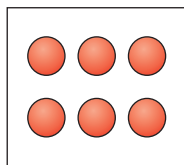
=



Add and Match

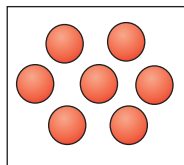


$3 + 2$



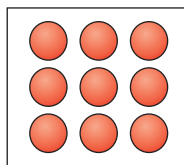
$3 + 3$

$4 + 2$



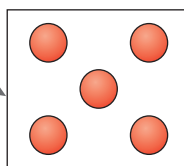
$2 + 3$

$3 + 4$



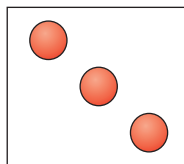
$0 + 8$

$8 + 0$



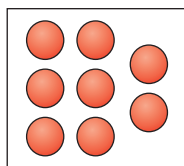
$3 + 6$

$6 + 3$



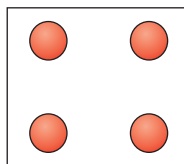
$5 + 2$

$2 + 1$



$1 + 2$

$1 + 3$



$3 + 1$



Add

$2 + 7 = \square$

$3 + 5 = \square$

$4 + 0 = \square$

$2 + 2 = \square$



$1 + 3 = \square$

$4 + 1 = \square$

$0 + 2 = \square$

$3 + 4 = \square$

$$\begin{array}{r} 3 \\ + 6 \\ \hline \end{array}$$

$$\begin{array}{r} 5 \\ + 2 \\ \hline \end{array}$$

$$\begin{array}{r} 3 \\ + 3 \\ \hline \end{array}$$

$$\begin{array}{r} 0 \\ + 8 \\ \hline \end{array}$$

$$\begin{array}{r} 6 \\ + 3 \\ \hline \end{array}$$

$$\begin{array}{r} 1 \\ + 7 \\ \hline \end{array}$$

$$\begin{array}{r} 2 \\ + 3 \\ \hline \end{array}$$

$$\begin{array}{r} 5 \\ + 0 \\ \hline \end{array}$$

$$\begin{array}{r} 3 \\ + 4 \\ \hline \end{array}$$





Write the missing numerals

$$\square + \square = 5$$

$$\square + \square = 6$$

$$\square + \square = 7$$

$$\square + \square = 3$$

$$\square + \square = 4$$

$$\square + \square = 9$$

$$\square + \square = 8$$

$$\square + \square = 1$$

