

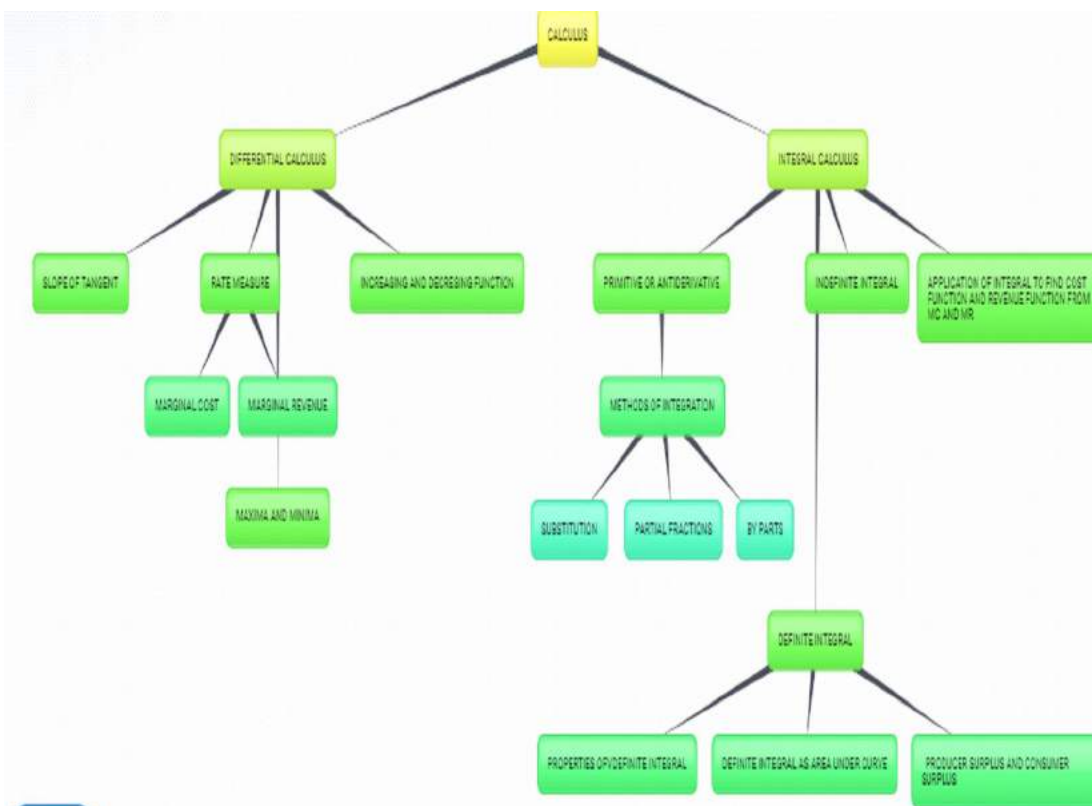
Integration and Its Applications

3.0 LEARNING OUTCOMES

At the end of this unit, the student will be able to:

- ❖ Define the terms: primitive or anti derivative and indefinite integrals
- ❖ Understand integration as inverse process of differentiation
- ❖ Understand the indefinite integrals as family of curves
- ❖ Find the integral of simple algebraic functions by substitution, using partial fractions and by parts
- ❖ Define definite integral as area of the region bounded by the curve $y=f(x)$, the x -axis and the ordinate $x=a$ and $x=b$
- ❖ Apply properties of definite integrals
- ❖ Apply the definite integral to find consumer surplus-producer surplus

CONCEPT MAP



3.1 Introduction:

We already know how to find the differential coefficient (derivative) of a given function. We also know that the derivative of a function is a function, e.g., the derivative of the function x^2 w. r. t. x is the function $2x$. Now, we want to find out the function whose derivative is the given function. Suppose the given function is $2x$ itself. One function whose derivative w.r.t. x is $2x$ is undoubtedly x^2 . But, there could be many other functions such as $x^2 + 5$, $x^2 + 2$, $x^2 - 1, \dots$, whose derivative w.r.t. x is $2x$. In fact, the derivative of $x^2 + c$, where c is an arbitrary constant, w.r.t. x , is $2x$.

In this section, we shall discuss the process of integration and different methods of integration along with some applications.

The concept of integration is widely used in business and economics. Some of them are as follows

- ✓ Marginal and total revenue, cost, and profit;
- ✓ Capital accumulation over a specified period of time;
- ✓ Consumer and producer surplus;

Integral of a function

If $\frac{d(F(x))}{dx} = f(x)$, then we say that the integral or primitive or anti-derivative of $f(x)$ w.r.t. x is $F(x)$ and, symbolically, we write

$$\int f(x)dx = F(x).$$

In $\int f(x)dx$, x is called the variable of integration. The function $f(x)$ is called the integrand. The symbol \int stands for the integral.

If $\frac{d(F(x))}{dx} = f(x)$, then we also have $\frac{d(F(x)+C)}{dx} = f(x)$, where C is an arbitrary constant, therefore,

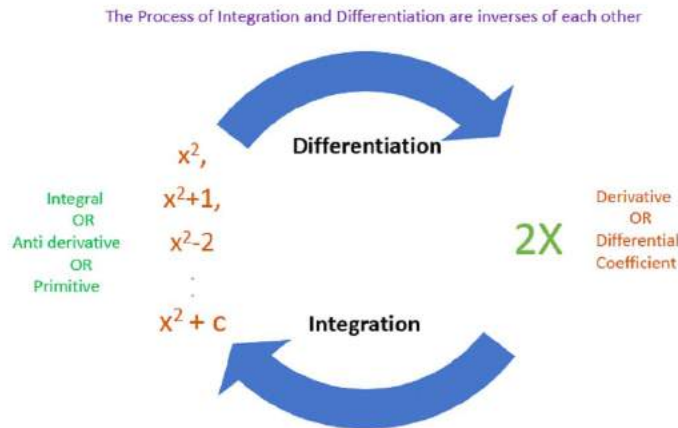
by definition, the integral of $f(x)$ w.r.t. x is $F(x) + C$, i.e., $\int f(x)dx = F(x) + C$

The integral of $f(x)$ w.r.t. x is not unique as c can be assigned infinitely many values. It is due to this indefinite nature of integral, we call it as indefinite integral. If C is assigned the value C_1 , then $F(x) + C_1$ is a particular integral of $f(x)$ w.r.t. x .

The process of finding integral of a function is called integration.

Hence, Integration, as understood above, is nothing but Inverse process of differentiation

Let us consider the following examples:



We know that derivative of x^2 w.r.t. x is $2x$ and we write $\frac{d}{dx}(x^2) = 2x$

Now we may say that anti-derivative (primitive) of $2x$ w.r.t. x is x^2

Further, $\frac{d}{dx}(x^2 + 1) = 2x$, $\frac{d}{dx}(x^2 + 2) = 2x$, $\frac{d}{dx}(x^2 - \frac{1}{3}) = 2x \dots$

Generalizing this, we may say $\frac{d}{dx}(x^2 + C) = 2x$ which means that anti-derivative of $2x$ can be $x^2 + 1$, $x^2 + 2$ and so on, thereby leading to infinitely many anti-derivatives. Thus, to accommodate all such anti-derivatives, we may say anti-derivative of $2x$ is $x^2 + C$ where C is an arbitrary constant or in general called parameter which leads to family of integrals.

In general, if $\frac{d}{dx}(F(x) + C) = f(x)$ then anti-derivative of $f(x)$ w.r.t. $x = F(x) + C$ which is also called indefinite integral because C can take any arbitrary value.

Geometrical Interpretation:

Understanding the integral as family of curves

Consider the curve $f(x) = 2x$, as discussed earlier, anti-derivative of $2x$ w.r.t. x is $x^2 + C = y$ say

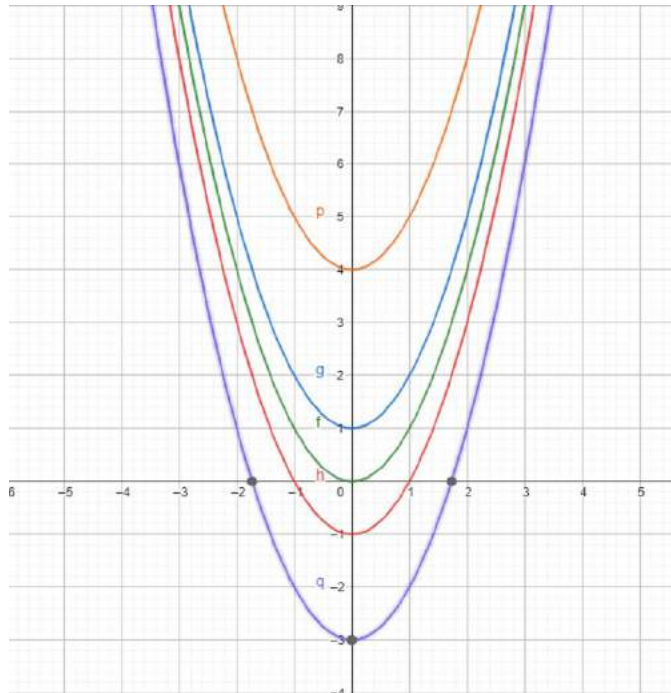
For $C = 0$, $y = x^2$

For $C = 1$, $y = x^2 + 1$

For $C = -1$, $y = x^2 - 1$ and so on

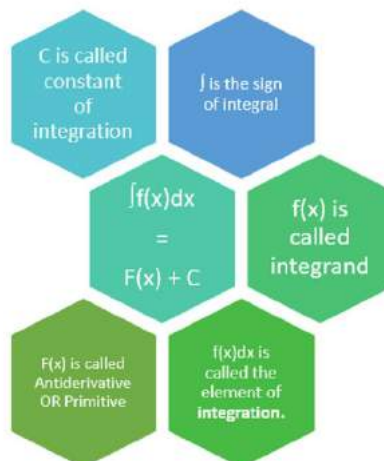
Thus, we get the family of parabolas whose vertex moves on y axis for different values of C which can be seen in figure below. This gives the geometrical interpretation of indefinite integral.

Thus, we may conclude : indefinite integral gives the family of curves members of which can be obtained by shifting any one of them parallel to itself.



ÿ https://mathinsight.org/indefinite_integral_intuition

ÿ https://mathinsight.org/applet/indefinite_integral_function



We already know the formulae for the derivatives of many important functions. From these formulae, we can write down the corresponding formulae (referred to as standard formulae) for the integrals of these functions, as listed below which will be used to find integrals of other functions.

Derivative Formulae	Corresponding Integral
$\frac{d}{dx}\left(\frac{x^{n+1}}{n+1}\right) = x^n, n \neq -1$	$\int x^n dx = \frac{x^{n+1}}{n+1} + C$ where $n \neq -1$
In particular, $\frac{d}{dx}(x) = 1$	$\int 1 dx = x + C$
$\frac{d}{dx}(e^x) = e^x$	$\int e^x dx = e^x + C$
$\frac{d}{dx}\left(\frac{a^x}{\log a}\right) = a^x = a^x$	$\int a^x dx = \frac{a^x}{\log a} + C$
	$\int \frac{1}{x} dx = \log x + C$ Proof: Case 1: $x > 0$ $\frac{d(\log(x))}{dx} = \frac{d(\log x)}{dx} = \frac{1}{x}$ Case 2: $x < 0$ $\frac{d(\log(x))}{dx} = \frac{d(\log(-x))}{dx} = \frac{1}{-x}(-1) = \frac{1}{x}$

Some Standard Integrals, we will use (without proof)

S. No.	Expression	Integral
1	$\int \frac{1}{\sqrt{x^2+a^2}} dx$	$\log x + \sqrt{x^2+a^2} + C$
2	$\int \frac{1}{\sqrt{x^2-a^2}} dx$	$\log x + \sqrt{x^2-a^2} + C$
3	$\int \sqrt{x^2+a^2} dx$	$\frac{x}{2}\sqrt{x^2+a^2} + \frac{a^2}{2} \log x + \sqrt{x^2+a^2} + C$
4	$\int \sqrt{x^2-a^2} dx$	$\frac{x}{2}\sqrt{x^2-a^2} - \frac{a^2}{2} \log x + \sqrt{x^2-a^2} + C$
5	$\int \frac{1}{x^2-a^2} dx$	$\frac{1}{2} \log\left \frac{x-a}{x+a}\right + C$

6	$\int \frac{1}{a^2 - x^2} dx$	$\frac{1}{2a} \log \left \frac{a+x}{a-x} \right + C$
7	$\int \sqrt{a^2 - x^2} dx$	$\frac{x}{2} \sqrt{a^2 - x^2} + \frac{a^2}{2} \sin^{-1} \left(\frac{x}{a} \right) + C$

Properties of Indefinite Integral

P1. The process of differentiation and integration are inverses of each other as follows:

$$P1. (a) \frac{d}{dx} \int f(x) dx = f(x)$$

$$P1. (b) \int \frac{d}{dx} f(x) dx = f(x) + C$$

$$P2. \int [f(x) + g(x)] dx = \int f(x) dx + \int g(x) dx$$

$$P3. \int k f(x) dx = k \int f(x) dx$$

Example 1

Evaluate the following Integrals

$$a) \int (x+3)(x+2) dx$$

$$b) \int \frac{x^3+1}{x^2} dx$$

$$c) \int \left[\sqrt{x} + \frac{1}{\sqrt{x}} \right]^2 dx$$

$$d) \int \frac{1}{\sqrt{x+a} + \sqrt{x+b}} dx$$

Solution: (a) Let $I = \int (x+3)(x+2) dx$

$$(x+3)(x+2) = x^2 + 5x + 2$$

$$\text{Hence, } I = \int (x^2 + 5x + 2) dx = \int x^2 dx + \int 5x dx + \int 2 dx$$

$$= \frac{x^{2+1}}{2+1} + C_1 + 5 \frac{x^{1+1}}{2} + C_2 + 2x + C_3$$

$$= \frac{x^3}{3} + 5 \frac{x^2}{2} + 2x + C_1 + C_2 + C_3$$

$$= \frac{x^3}{3} + \frac{5x^2}{2} + 2x + C \text{ where } C = C_1 + C_2 + C_3$$

NOTE: Now onwards, in such situations we will add C only once

$$b) \text{ Let } I = \int \frac{x^3+1}{x^2} dx = \int \frac{x^3}{x^2} dx + \int \frac{1}{x^2} dx$$

$$= \int x dx + \int x^{-2} dx$$

$$= \frac{x^{1+1}}{1+1} + \frac{x^{-2+1}}{-2+1} + C = \frac{x^2}{2} + \frac{x^{-1}}{-1} + C = \frac{x^2}{2} - \frac{1}{x} + C$$

$$\begin{aligned}
 \text{c) Let } I &= \int \left[\sqrt{x} + \frac{1}{\sqrt{x}} \right]^2 dx = \int \sqrt{x}^2 + 2\sqrt{x} \cdot \frac{1}{\sqrt{x}} + \left[\frac{1}{\sqrt{x}} \right]^2 dx \\
 &= \int x dx + \int 2 dx + \int \frac{1}{x} dx \\
 &= \frac{x^2}{2} + 2x + \log |x| + C
 \end{aligned}$$

$$\begin{aligned}
 \text{d) Let } I &= \int \frac{1}{\sqrt{x+a} + \sqrt{x+b}} dx = \int \frac{1}{\sqrt{x+a} + \sqrt{x+b}} \cdot \frac{\sqrt{x+a} - \sqrt{x+b}}{\sqrt{x+a} - \sqrt{x+b}} dx \\
 &= \int \frac{\sqrt{x+a} - \sqrt{x+b}}{(x+a) - (x+b)} dx \\
 &= \int \frac{\sqrt{x+a}}{a-b} dx - \int \frac{\sqrt{x+b}}{a-b} dx \\
 &= \frac{(x+a)^{3/2}}{(a-b)\left(\frac{3}{2}\right)} - \frac{(x+b)^{3/2}}{(a-b)\left(\frac{3}{2}\right)} + C \\
 &= \frac{2}{3(a-b)} \left[(x+a)^{\frac{3}{2}} - (x+b)^{\frac{3}{2}} \right] + C
 \end{aligned}$$

Example 2.

The marginal revenue of a company is given by $MR = 80 + 20x + 3x^2$, where x is the number of units sold for a period. Find the total revenue function $R(x)$ if at $x=2$, $R(x) = 240$.

Solution: We have $\frac{d(R(x))}{dx} = 80 + 20x + 3x^2$ We find the total revenue function $R(x)$ by integrating

both sides w.r.t. x

$$\int \frac{d(R(x))}{dx} dx = \int (80 + 20x + 3x^2) dx$$

$$\Rightarrow R(x) = 80x + 10x^2 + x^3 + C.$$

The constant of integration C can be determined using the initial condition $R(x=2) = 240$.

Hence, $160 + 40 + 8 + C = 240 \Rightarrow C = 32$.

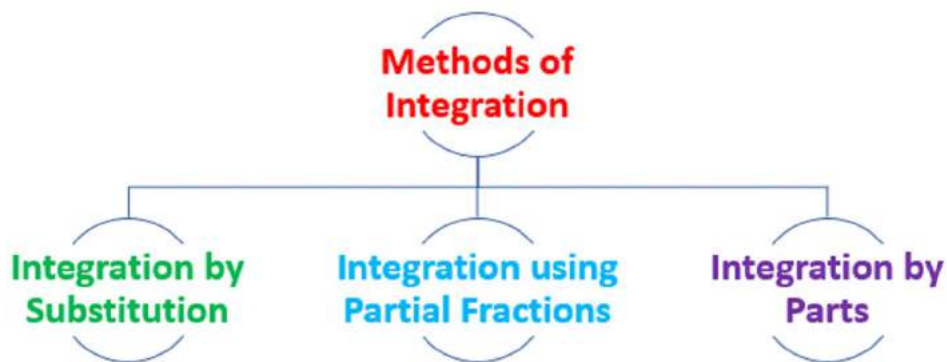
So, the total revenue function is given by

$$R(x) = 80x + 10x^2 + x^3 + 32.$$

Methods of Integration:

In previous section, we discussed integrals of those functions which were readily obtainable from derivatives of some functions. It was based on inspection, i.e., on the search of a function F whose derivative is f which led us to the integral.

However, this method, which depends on inspection, may not work well for many functions. Hence, we need to develop additional techniques or methods for finding the integrals by reducing them into standard forms. Some important methods are as follows



3.2 Integration by substitution

Rule of substitution

$$\int f(g(x))g'(x)dx = \int f(t)dt, \text{ where } g(x) = t$$

Proof:

$$\frac{d(\int f(t)dt)}{dx} = \frac{d(\int f(t)dt)}{dt} \times \frac{dt}{dx} = f(t)g'(x) = f(g(x))g'(x)$$

Note: When we make the substitution $g(x) = t$, we have $\frac{dt}{dx} = g'(x) \dots (1)$. Since, the formula established above allows us to write $g'(x)dx$ as dt , we may be formally allowed to write equation (1) as $g'(x)dx = dt$ while working out the solution. Although, $\frac{dx}{dt}$ does not mean $dx : dt$.

Similar rules may be established such as

$$\int f(x)f'(x)dx = \int tdt, \text{ where } f(x) = t$$

Consider $\int 2x[\sqrt{x^2 + 1}]dx$

Here the integrand is $2x[\sqrt{x^2 + 1}]$ for which we do not have direct formula applicable to get the integral.

If we assume $x^2 + 1 = t$ and differentiate, we get $2x = \frac{dt}{dx}$ which is formally written as $2xdx = dt$

Thus, given integral becomes $\int \sqrt{t} dt$ which can be determined using the formula $\int x^n dx = \frac{x^{n+1}}{n+1}$

+ C where $n \neq -1$

$$\int \sqrt{t} dt = \frac{t^{\frac{1}{2}+1}}{\frac{1}{2}+1} + C = \frac{2}{3}t^{\frac{3}{2}} + C$$

putting the value of t we get, $\int 2x[\sqrt{x^2 + 1}] dx = \frac{2}{3}(x^2 + 1)^{\frac{3}{2}} + C$

Following the above rule, we may also write $\int f(x) dx = \int f(g(t))g'(t) dt$ where $x = g(t)$

Thus, we observe that the given integral $\int f(x) dx$ can be transformed into another form by changing the independent variable x to t by substituting $x = g(t)$ and $dx = g'(t) dt$

Some common substitutions that usually work well are:

Integrand	Substitution
$\sqrt{f(x)}$	Put $f(x) = t$ or t^2
$\log x$	Put $\log x = t$ or $x = e^t$
$f(g(x))$ or $f(g(x))$	Put $g(x) = t$
$[f(x)]^{m/n}$	Put $f(x) = t^n$

Important Rule: If $\int f(x) dx = F(x) + C$ then $\int f(ax + b) dx = \frac{1}{a} F(ax+b) + C$

Proof: let $ax + b = t$ differentiating we get $a dx = dt$

Thus, integral becomes $\int f(t) \frac{1}{a} dt = \frac{1}{a} \int f(t) dt = \frac{1}{a} F(t) + C = \frac{1}{a} F(ax+b) + C$

Example 3

Evaluate the following:

a) $\int \sqrt{2x + 3} dx$

b) $\int e^{4-5x} dx$

c) $\int (ax + b)^2 dx$

d) $\int [a^x + a^{-x}]^2 dx$

Solution:

a) $\int \sqrt{2x + 3} dx = \frac{(2x + 3)^{3/2}}{2(\frac{3}{2})} + C = \frac{(2x + 3)^{3/2}}{3} + C$

b) $\int e^{4-5x} dx = \frac{e^{4-5x}}{-5} + C$

c) $\int (ax + b)^2 dx = \frac{(ax + b)^3}{3} + C$

d) Let $I = \int [a^x + a^{-x}]^2 dx = \int a^{2x} + a^{-2x} + 2a^x \cdot a^{-x} dx$
 $= \frac{a^{2x}}{2} + \frac{a^{-2x}}{-2} + 2x + C$

Example 4

Evaluate the following integrals by the method of substitution

a) $\int x\sqrt{x+2} \, dx$

b) $\int \frac{x}{\sqrt{x-1}} \, dx$

c) $\int 3^{3^x} 3^x dx$

Solution:

a) Let $I = \int x\sqrt{x+2} \, dx$

Let $x + 2 = t$ $dx = dt$ and $x = t - 2$

I becomes, $\int (t-2)\sqrt{t} \, dt = \int (t)^{3/2} \, dt - \int 2(t)^{1/2} \, dt$

$$= \frac{2t^{5/2}}{5} - 2 \cdot \frac{2t^{3/2}}{3} + C$$

$$= \frac{2(x+2)^{5/2}}{5} - \frac{4(x+2)^{3/2}}{3} + C$$

Remark: we may also substitute $x + 2 = t^2$

b) Let $I = \int \frac{x}{\sqrt{x-1}} \, dx$

Let $x - 1 = t^2$ gives $dx = 2t \, dt$ and $x = t^2 + 1$

Thus, I becomes $\int \frac{t^2+1}{t} 2t \, dt = \int 2t^2 + 2 \, dt = \frac{2t^3}{3} + 2t + C$

$$\therefore I = \frac{2(x-1)^{3/2}}{3} + 2\sqrt{x-1} + C$$

d) Let $I = \int 3^{3^x} 3^x dx$ Put $3^x = t$ which gives $3^x \log 3 dx = dt$

I becomes $\int \frac{3^t}{\log 3} dt = \frac{3^t}{(\log 3)^2} + C = \frac{3^{3^x}}{(\log 3)^2} + C$

Alternatively, we may put $3^{3^x} = t$

Example 5

Evaluate a) $\int \frac{1}{\sqrt{9+4x^2}} \, dx$

b) $\int \frac{1}{\sqrt{5+4x+x^2}} \, dx$

Solution

a) Let $I = \int \frac{1}{\sqrt{9+4x^2}} \, dx = \int \frac{1}{\sqrt{(2x)^2+3^2}} \, dx$

[using $\int \frac{1}{\sqrt{x^2+a^2}} dx = \log|x+\sqrt{x^2+a^2}| + C$]

$$= \frac{1}{2} \log|2x + \sqrt{9+4x^2}| + C$$

b) Let $I = \int \frac{1}{\sqrt{5+4x+x^2}} dx$

Consider $5 + 4x + x^2 = 5 - 4 + 4 + 4x + x^2$ (by method of completion of squares)
 $= (x + 2)^2 + 1^2$

Thus, $I = \int \frac{1}{\sqrt{(x+2)^2+1^2}} dx = \log | x + 2 + \sqrt{(x+2)^2 + 1^2} | + C$
 $= \log | x + 2 + \sqrt{5 + 4x + x^2} | + C$

Example 6

The weekly marginal cost of producing x pairs of tennis shoes is given by

$MC = 17 + \frac{200}{x+1}$, where $C(x)$ is cost in Rupees. If the fixed costs are ₹ 2,000 per day, find the cost function.

Solution: As $MC = 17 + \frac{200}{x+1}$

$$C(x) = \int MC(x)dx = \int \left[17 + \frac{200}{x+1}\right] dx = 17x + 200 \log|x+1| + C$$

Given that, when $x = 0$, $C(x) = 2000$

$2000 = 17(0) + 200 \log 1 + C$ which gives $C = 2000$

Hence, $C(x) = 17x + 200 \log|x+1| + 2000$

Exercise 3.1

Q1. Evaluate the following:

i) $\int (x^2 + 1)(x - 2) dx$

ii) $\int \left(x + \frac{1}{x}\right)^2 dx$

iii) $\int \frac{x^3 + x^2 + x + 1}{x+1} dx$

iv) $\int \sqrt{3x+5} dx$

v) $\int \left(x^2 + \frac{1}{x^2}\right)\left(x^2 - \frac{1}{x^2}\right) dx$

vi) $\int \frac{1}{\sqrt{x+4} - \sqrt{x-3}} dx$

Q2. Evaluate the following by substitution method

i) $\int \frac{x + e^{2x}}{x^2 + e^{2x}} dx$

ii) $\int \frac{dx}{\sqrt{x+x}}$

iii) $\int \frac{e^x(1+x)}{(1+xe^x)^2} dx$

iv) $\int \frac{2x}{\sqrt[3]{x^2+1}} dx$

v) $\int \frac{e^{2x} + e^{-2x}}{e^{2x} - e^{-2x}} dx$

vi) $\int \frac{3e^x - 5e^{-x}}{4e^x + 5e^{-x}} dx$

$$\text{vii) } \int \frac{2x-3}{x^2-3x-18} dx$$

$$\text{viii) } \int \frac{1}{x(1+\log x)^2} dx$$

$$\text{ix) } \int \frac{a^{x-1} \cdot \log a + x^{a-1}}{a^x + x^a} dx$$

$$\text{Q3. Find i) } \int \frac{1-2x}{\sqrt{1+x^2}} dx$$

$$\text{ii) } \int \frac{1}{\sqrt{3x^2+2x-1}} dx$$

Q4. If the marginal revenue function of a firm in the production of output is $MR = 40 - 10x^2$ where x is the level of output and total revenue is ₹ 120 at 3 units of output, find the total revenue function.

Q5. The marginal cost function of producing x units of a product is given by $MC = \frac{x}{\sqrt{2500+x^2}}$.

Find the total cost function and the average cost function, if the fixed cost is ₹ 1000.

(Note: Average Cost Function is obtained by dividing cost function by number of units produced.)

Q6. The marginal cost of producing x units of a product is given by $MC = x\sqrt{x+1}$. The cost of producing 3 units is ₹ 7800. Find the cost function.

3.3 Integration by Partial Fractions

We know that a rational function is defined as the ratio of two polynomials in the form $\frac{P(x)}{Q(x)}$, where $P(x)$ and $Q(x)$ are polynomials in x and $Q(x) \neq 0$.

Depending on the degree of $P(x)$ and $Q(x)$, a rational function can be classified as Proper or Improper.

If the degree of $P(x)$ is less than the degree of $Q(x)$, then the rational function is called proper, otherwise, it is called improper.

We may reduce the improper rational functions to the proper rational functions by the process of long division. Thus, if $\frac{P(x)}{Q(x)}$ is improper, then we may divide $P(x)$ by $Q(x)$. We know that Dividend = Divisor \times Quotient + Remainder. Thus, $P(x) = Q(x) \times T(x) + R(x)$ where degree of $R(x) <$ degree of $Q(x)$.

$$\text{Therefore, } \frac{P(x)}{Q(x)} = \frac{Q(x) \times T(x) + R(x)}{Q(x)} = \frac{Q(x) \times T(x)}{Q(x)} + \frac{R(x)}{Q(x)} = T(x) + \frac{R(x)}{Q(x)}$$

Example 7

Identify the following expressions as Rational Functions. Further classify them as Proper or Improper. If Improper, express them as sum of a polynomial and proper rational function.

$$\text{a) } \frac{1}{-3x^2 + 4x - 5}$$

$$\text{b) } \frac{\sqrt{x}}{(x+1)(2x+3)}$$

$$\text{c) } \frac{(x+1)(x+2)}{(x+3)(x+4)}$$

Solution

a) In $\frac{1}{-3x^2 + 4x - 5}$ both numerator and denominator are polynomials, hence $\frac{1}{-3x^2 + 4x - 5}$ is a rational function

Note : 1 is a constant polynomial of degree 0.

As degree of numerator < degree of denominator, hence it is a proper rational function.

b) In $\frac{\sqrt{x}}{(x+1)(2x+3)} = \frac{\sqrt{x}}{2x^2 + 5x + 3}$ since numerator is not a polynomial, hence $\frac{\sqrt{x}}{(x+1)(2x+3)}$ is not a rational function.

c) In $\frac{(x+1)(x+2)}{(x+3)(x+4)} = \frac{x^2 + 3x + 2}{x^2 + 7x + 12}$ both numerator and denominator are polynomials, hence

$\frac{(x+1)(x+2)}{(x+3)(x+4)}$ is a rational function

As degree of numerator = degree of denominator, hence it is an improper rational function.

Consider $\frac{x^2 + 3x + 2}{x^2 + 7x + 12}$ dividing numerator by denominator, we get

$$\begin{array}{r} x^2 + 7x + 12 \overline{)x^2 + 3x + 2} \quad 1 \\ \underline{-x^2 + 7x + 12} \\ -4x - 10 \end{array}$$

Thus, $x^2 + 3x + 2 = 1 \times (x^2 + 7x + 12) + (-4x - 10)$

$$\frac{x^2 + 3x + 2}{x^2 + 7x + 12} = \frac{1 \times (x^2 + 7x + 12) + (-4x - 10)}{x^2 + 7x + 12} = \frac{(x^2 + 7x + 12)}{x^2 + 7x + 12} + \frac{(-4x - 10)}{x^2 + 7x + 12}$$

$= 1 + \frac{(-4x - 10)}{(x+3)(x+4)}$ is the required sum of polynomial and proper rational function.

For the purpose of Integration, we shall be considering those rational functions as integrands whose denominators can be factorised into linear and quadratic factors. In order to evaluate Integral with integrand $\frac{P(x)}{Q(x)}$, where P(x) and Q(x) are polynomials in x and Q(x) ≠ 0 and $\frac{P(x)}{Q(x)}$ is a proper rational function. It may be possible to write the integrand as a sum of simpler rational functions by a method called Partial Fraction Decomposition. Then the integration can be carried out easily using the already known methods.

Here is the list of the types of simpler partial fractions that are to be associated with various kind of rational functions.

S.No.	Type of Rational Function	Corresponding Partial Fractions Decomposition
1	$\frac{px+q}{(x+a)(x+b)}$	$\frac{A}{x+a} + \frac{B}{x+b}$
2	$\frac{px^2+qx+c}{(x+a)(x+b)(x+c)}$	$\frac{A}{x+a} + \frac{B}{x+b} + \frac{C}{x+c}$
3	$\frac{px+q}{(x+a)^2}$	$\frac{A}{x+a} + \frac{B}{(x+a)^2}$
4	$\frac{px^2+qx+c}{(x+a)(x+b)^2}$	$\frac{A}{x+a} + \frac{B}{x+b} + \frac{C}{(x+b)^2}$
5	$\frac{px^2+qx+c}{(x+a)(x^2+b)}$	$\frac{A}{x+a} + \frac{Bx+C}{x^2+b}$

Consider $\frac{px+q}{(x+a)(x+b)} = \frac{A}{x+a} + \frac{B}{x+b}$. In order to find A and B, we may write $px + q = A(x + b) + B(x + a)$. The partial fractions are so designed that this equation turns out to be an identity. Equating coefficients of x and constant terms on both sides, we get $p = A + B$ and $q = Ab + Ba$, which can be solved to get A and B. Similarly, we may find A, B and or C for other cases

Example 8

Express the following as sum of two or more partial fractions and hence integrate

a) $\frac{1}{(x-1)(x+3)}$

b) $\frac{3x-2}{(x+1)(x-2)^2}$

c) $\frac{(x-1)(x-2)}{(x-3)(x-4)}$

Solution:

a) Let $\frac{1}{(x-1)(x+3)} = \frac{A}{x-1} + \frac{B}{x+3}$

$$\therefore 1 = A(x + 3) + B(x - 1) = Ax + 3A + Bx - B$$

$$1 = (A + B)x + 3A - B$$

Comparing coefficients of x and constant terms on both sides we get

$$A + B = 0 \text{ and } 3A - B = 1$$

Solving we get, $A = \frac{1}{4}$ and $B = -\frac{1}{4}$

$$\text{Let } I = \int \frac{1}{(x-1)(x+3)} dx = \frac{1}{4} \int \frac{1}{x-1} dx - \frac{1}{4} \int \frac{1}{x+3} dx$$

$$= \frac{1}{4} \log|x-1| - \frac{1}{4} \log|x+3| + C$$

b) Let $\frac{3x-2}{(x+1)(x-2)^2} = \frac{A}{x+1} + \frac{B}{x-2} + \frac{C}{(x-2)^2}$

$$3x-2 = A(x-2)^2 + B(x+1)(x-2) + C(x+1)$$

$$3x-2 = A(x^2 - 4x + 4) + B(x^2 - x - 2) + C(x+1)$$

$$= (A + B)x^2 + (-4A - B + C)x + 4A - 2B + C$$

Comparing coefficients of x^2 , x and constant terms on both sides, we get

$$A + B = 0, -4A - B + C = 3, 4A - 2B + C = -2$$

Solving we get $A = \frac{-5}{9}$, $B = \frac{5}{9}$, $C = \frac{4}{3}$

$$\frac{3x-2}{(x+1)(x-2)^2} = \frac{-5}{9} \frac{1}{x+1} + \frac{5}{9} \frac{1}{x-2} + \frac{4}{3} \frac{1}{(x-2)^2}$$

Let $I = \int \frac{3x-2}{(x+1)(x-2)^2} dx = \int \frac{-5}{9} \frac{1}{x+1} dx + \frac{5}{9} \int \frac{1}{x-2} dx + \frac{4}{3} \int \frac{1}{(x-2)^2} dx$

$$I = \frac{-5}{9} \log|x+1| + \frac{5}{9} \log|x-2| - \frac{4}{3(x-2)} + C$$

c) $\frac{(x-1)(x-2)}{(x-3)(x-4)} = \frac{(x^2-3x+2)}{(x^2-7x+12)} = \frac{(x^2-7x+12+4x-10)}{(x^2-7x+12)} = 1 + \frac{4x-10}{(x^2-7x+12)}$

Now $\frac{4x-10}{(x^2-7x+12)} = \frac{4x-10}{(x-3)(x-4)} = \frac{A}{x-3} + \frac{B}{x-4}$

$$4x-10 = A(x-4) + B(x-3) = (A+B)x + (-4A-3B)$$

$$A+B=4, -4A-3B=-10$$

Solving we get $A = -2$, $B = 6$

So, $\frac{4x-10}{(x^2-7x+12)} = \frac{-2}{x-3} + \frac{6}{x-4}$

Hence, $\frac{(x-1)(x-2)}{(x-3)(x-4)} = 1 + \frac{-2}{x-3} + \frac{6}{x-4}$

Let $I = \int \frac{(x-1)(x-2)}{(x-3)(x-4)} dx = \int [1 + \frac{-2}{x-3} + \frac{6}{x-4}] dx$

$$= x - 2\log|x-3| + 6\log|x-4| + C$$

Exercise 3.2

Q1. Integrate the following expressions

i) $\frac{x+1}{(x+2)(x+4)}$

ii) $\frac{x}{(x^2+1)(x^2+2)}$

iii) $\frac{1}{e^{2x}-1}$

iv) $\frac{1}{x((\log x)^2-3\log x+2)}$

v) $\frac{3x-2}{(x-2)^2(x+2)}$

vi) $\frac{1}{e^{2x}+e^x}$

vii) $\frac{5x+4}{(x^2-1)(x+2)}$

viii) $\frac{x}{(x-1)^2(x+2)}$

ix) $\frac{1}{x(x^4-1)}$

x) $\frac{1}{x(x^n+1)}$

xi) $\frac{1-x}{x(1-2x)}$

Q2. The marginal revenue function for a firm is given by $\frac{5x^2+30x+51}{(x+3)^2}$.

Show that the revenue function is given by $\frac{2x}{x+3} + 5x$

Q3. Find the total revenue function and demand function, if the marginal revenue function is given by

$$MR(x) = \frac{ab}{(x+b)^2} - c$$

3.4 Integration by Parts

Now we will discuss one more method of integration, that can be used in integrating products of functions.

If u and v are any two differentiable functions of a single variable x (say). Then, by the product rule of differentiation, we have

$$\frac{d}{dx}(uv) = v \frac{d}{dx}(u) + u \frac{d}{dx}(v)$$

Integrating both sides w.r.t. x , we get

$$uv = \int v \frac{d}{dx}(u) dx + \int u \frac{d}{dx}(v) dx \Rightarrow \int u \frac{d}{dx}(v) dx = uv - \int v \frac{d}{dx}(u) dx \quad \dots\dots\dots(i)$$

Let $u = f(x)$ and $\frac{d}{dx}(v) = g(x)$

Then (i) becomes $\int f(x)g(x) dx = f(x)\int g(x) dx - \int [f'(x) \cdot \int g(x) dx] dx \therefore \frac{d}{dx}(u) = f'(x)$

If we take f as the first function and g as the second function, then this formula may be stated as follows:

“The integral of the product of two functions = (first function) \times (integral of the second function) – Integral of the product of (derivative of the first function) and (integral of the second function)”

There is no particular rule for choosing a function out of the two given functions in the integrand to be first or second. The one which is easily differentiable may be taken as first function and second function should be such that its integral is readily available.

Usually, the order of first and second functions should be in the order of ILATE functions, where I, L, A, T, E stand for inverse trigonometric function, logarithmic function, algebraic function, trigonometrical function, exponential function. This works in most of the situations.

Example 9

Integrate the following:

a) xe^{2x}

b) $\log x$

Solution :

a) Let $I = \int xe^{2x} dx$

Assuming x as first function and e^{2x} as second function, and applying by parts, we get

$$\begin{aligned} I &= x \int e^{2x} dx - \int \left[\frac{d}{dx}(x) \int e^{2x} dx \right] dx + C \\ &= x \cdot \frac{e^{2x}}{2} - \int 1 \cdot \frac{e^{2x}}{2} + C \\ &= x \cdot \frac{e^{2x}}{2} - \frac{e^{2x}}{4} + C \end{aligned}$$

b) Let $I = \int \log x dx = \int 1 \cdot (\log x) dx$

Assuming $\log x$ as first function and 1 as second function, and applying by parts, we get

$$\begin{aligned} I &= \log x \int 1 dx - \int \left[\frac{d}{dx}(\log x) \cdot \int 1 dx \right] dx + C \\ &= (\log x) \cdot x - \int \frac{1}{x} \cdot (x) dx + C \\ &= (\log x) \cdot x - x + C \end{aligned}$$

Integral of the type: $\int e^x [f(x) + f'(x)] dx$

Let $I = \int e^x [f(x) + f'(x)] dx = \int e^x f(x) dx + \int e^x f'(x) dx = I_1 + I_2$ say

Applying Integration by Parts in I_1 , we get

$$I_1 = f(x) \int e^x dx - \int \left[\frac{df(x)}{dx} \right] \int e^x dx = f(x)e^x - \int f'(x)e^x dx + C$$

Thus, $I = f(x)e^x - \int f'(x)e^x dx + \int e^x f'(x) dx + C = f(x)e^x + C$

Example 10

Evaluate

a) $\int e^x [x^2 + 2x] dx$

b) $\int e^x \left[\log x + \frac{1}{x} \right] dx$

c) $\int e^x \left[\frac{x-1}{x^2} \right] dx$

d) $\int \left[\frac{1}{\log x} - \frac{1}{(\log x)^2} \right] dx$

Solution :

a) Let $I = \int e^x [x^2 + 2x] dx$, Here $f(x) = x^2$ and $f'(x) = 2x$

\therefore by the rule $\int e^x [f(x) + f'(x)] dx = f(x)e^x + C$ we get, $I = e^x x^2 + C$

b) Let $I = \int e^x \left[\log x + \frac{1}{x} \right] dx$, Here $f(x) = \log x$ and $f'(x) = \frac{1}{x}$

\therefore by the rule $\int e^x [f(x) + f'(x)] dx = f(x)e^x + C$ we get, $I = e^x \log x + C$

c) Let $I = \int e^x \left[\frac{x-1}{x^2} \right] dx = \int e^x \left[\frac{x}{x^2} - \frac{1}{x^2} \right] dx = \int e^x \left[\frac{1}{x} + \frac{-1}{x^2} \right] dx$

Here $f(x) = \frac{1}{x}$ and $f'(x) = \frac{-1}{x^2}$

\therefore by the rule $\int e^x [f(x) + f'(x)] dx = f(x)e^x + C$ we get, $I = e^x \frac{1}{x} + C$

d) Let $I = \int \left[\frac{1}{\log x} - \frac{1}{(\log x)^2} \right] dx$

Method 1

Let $\log x = t \therefore x = e^t$ implies $dx = e^t dt$

Hence, $I = \int e^t \left[\frac{1}{t} - \frac{1}{(t)^2} \right] dt$. Here $f(t) = \frac{1}{t}$ and $f'(t) = \frac{-1}{t^2}$

\therefore by the rule $\int e^t [f(t) + f'(t)] dt = f(t)e^t + C$ we get, $I = e^t \frac{1}{t} + C$

$I = x \frac{1}{\log x} + C$

Method 2

$$\text{Let } I = \int \left[\frac{1}{\log x} \right] dx - \int \left[\frac{1}{(\log x)^2} \right] dx = I_1 + I_2$$

$$\text{In } I_1 = \int \left[\frac{1}{\log x} \right] dx = \int \left[\frac{1}{\log x} \right] \cdot 1 dx$$

Assuming $\frac{1}{\log x}$ as first function and 1 as second function and applying integration by parts

$$I_1 = \frac{1}{\log x} \int 1 dx - \int \left[\frac{d}{dx} \frac{1}{\log x} \cdot \int 1 dx \right] dx$$

$$= \frac{1}{\log x} x - \int \left[\frac{-1}{(\log x)^2} \cdot \frac{1}{x} x \right] dx + C$$

$$= \frac{1}{\log x} x - \int \left[\frac{-1}{(\log x)^2} \right] dx + C = \frac{1}{\log x} x + \int \left[\frac{1}{(\log x)^2} \right] dx + C$$

$$\text{Thus } I = \frac{1}{\log x} x + \int \left[\frac{1}{(\log x)^2} \right] dx + C - \int \left[\frac{1}{(\log x)^2} \right] dx = \frac{1}{\log x} x + C$$

Exercise 3.3

Q1. Integrate the following functions

- | | | |
|-------------------------|-----------------------|------------------|
| i) $x e^{2x+3}$ | ii) $x \log(x^2 + 1)$ | iii) $x^2 e^x$ |
| iv) $x \log x$ | v) $x \log 2x$ | vi) $x^2 \log x$ |
| vii) $(x^2 + 1) \log x$ | viii) $x (\log x)^2$ | |

Q2. Evaluate the following

- | | |
|--|---|
| i) $\int e^x [x^{-2} - 2x^{-3}] dx$ | ii) $\int e^{3x} [\log 3x + \frac{1}{3x}] dx$ |
| iii) $\int e^{2x} \left[\frac{2x-1}{4x^2} \right] dx$ | iv) $\int \left[\log \log x + \frac{1}{(\log x)^2} \right] dx$ |

3.5 Definite Integral

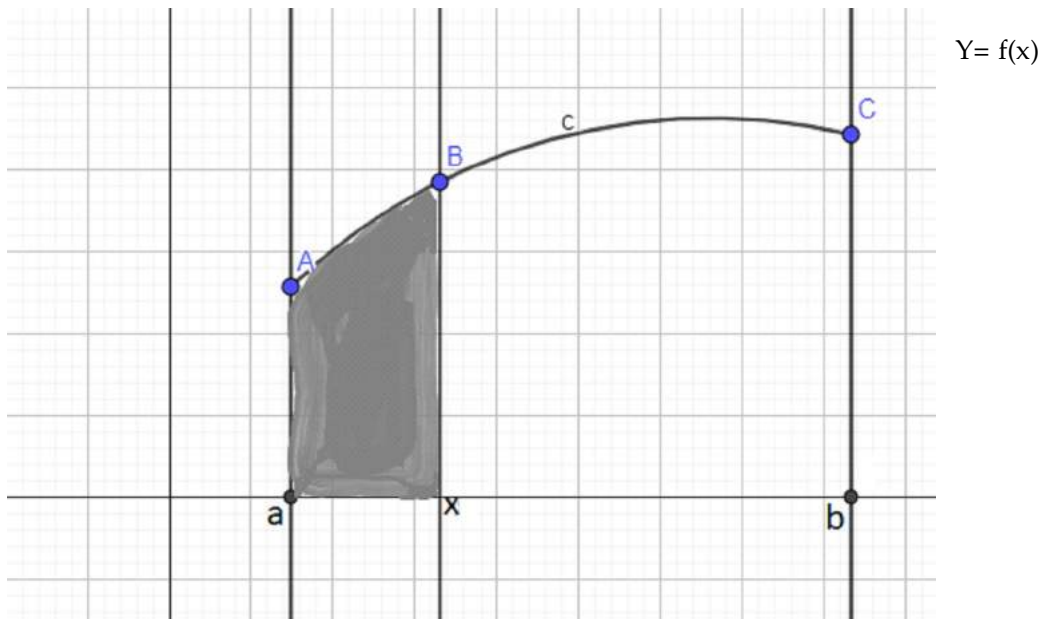
So far in this topic, we have studied about the indefinite integrals and discussed a few methods of evaluating these. In this particular section, we shall define definite integral of a function.

A definite integral is denoted by $\int_a^b f(x) dx$ where a is called the lower limit of the integral and b is called the upper limit of the integral.

Definite Integral has a fixed value.

Area Function

If $f(x)$ is a continuous function defined over $[a, b]$, then we define $\int_a^b f(x)dx$ as the area of the region bounded by the curve $y = f(x)$, the ordinates $x = a$ and $x = b$ and the x -axis. Let x be a given point in $[a, b]$. Then the shaded area in the figure given below is a function of x denoted by $A(x)$ and is called the Area Function. Clearly, $A(x) = \int_a^x f(x)dx, a \leq x \leq b$



First fundamental theorem of Integral Calculus

Theorem 1 : Let f be a continuous function on the closed interval $[a, b]$ and let $A(x)$ be the area function. Then $A'(x) = f(x)$, for all $x \in (a, b)$.

Second fundamental theorem of Integral Calculus

Following theorem enables us to evaluate definite integrals by making use of anti-derivative.

Theorem 2 : Let f be continuous function defined on the closed interval $[a, b]$ and $F(x)$ be an anti-derivative of $f(x)$. Then $\int_a^b f(x)dx = F(x)|_a^b = F(b) - F(a)$.

Note: In $\int_a^b f(x)dx$, the function f needs to be continuous in $[a, b]$.

Further, any anti-derivative works, i.e. If we take the anti-derivative as $F(x) + C_1$, the value of the definite integral will still turn out to be $F(b) - F(a)$.

Steps for calculating $\int_a^b f(x)dx$

(i) Find the indefinite integral $\int f(x)dx$. Let this be $F(x)$.

(ii) Evaluate $F(b) - F(a)$ which is equal to the value of $\int_a^b f(x)dx$

Example 11

Evaluate the following definite integrals:

a) $\int_0^3 x^3 dx$

b) $\int_0^1 \frac{1}{\sqrt{1+x^2}} dx$

c) $\int_1^4 \frac{x}{(x+1)(x+4)} dx$

d) $\int_0^2 \sqrt{x^2 + 4} dx$

e) $\int_0^1 xe^x dx$

f) $\int_3^5 \frac{x^2}{(x-1)(x-2)} dx$

Solution :

a) $\int_0^3 x^3 dx = \frac{x^4}{4} \Big|_0^3 = \frac{3^4}{4} - \frac{0^4}{4} = \frac{81}{4}$

b) $\int_0^1 \frac{1}{\sqrt{1+x^2}} dx = \log|x+\sqrt{1+x^2}| \Big|_0^1$
 $= \log|1+\sqrt{1+1^2}| - \log|0+\sqrt{1+0^2}|$
 $= \log(1+\sqrt{2}) - \log 1 = \log(1+\sqrt{2})$

c) Let $I = \int_1^4 \frac{x}{(x+1)(x+4)} dx$

Consider $\frac{x}{(x+1)(x+4)} = \frac{A}{x+1} + \frac{B}{x+4}$

$$x = A(x+4) + B(x+1)$$

$$x = (A+B)x + 4A+B$$

comparing coefficients of x and constant terms on both sides

$$A + B = 1, 4A + B = 0$$

Solving we get, $A = \frac{-1}{3}, B = \frac{4}{3}$

$$\frac{x}{(x+1)(x+4)} = \frac{-1}{3} \frac{1}{x+1} + \frac{4}{3} \frac{1}{x+4}$$

$$I = \frac{-1}{3} \log|x+1| + \frac{4}{3} \log|x+4| \Big|_1^4 = -\frac{1}{3} \log \frac{5}{2} + \frac{4}{3} \log \frac{8}{5}$$

d) $\int_0^2 \sqrt{x^2 + 4} dx = \frac{x}{2} \sqrt{x^2 + 4} + \frac{4}{2} \log|x + \sqrt{x^2 + 4}| \Big|_0^2$
 $= \frac{2}{2} \sqrt{2^2 + 4} + \frac{4}{2} \log|2 + \sqrt{2^2 + 4}| - \left[\frac{0}{2} \sqrt{0^2 + 4} + \frac{4}{2} \log|0 + \sqrt{0^2 + 4}| \right]$
 $= \sqrt{8} + 2 \log(2 + \sqrt{8}) - 2 \log 2 = \sqrt{8} + 2 [\log(2 + 2\sqrt{2}) - \log 2]$
 $= 2\sqrt{2} + 2 \log(1 + \sqrt{2})$

e) Let $I = \int_0^1 x e^x dx$

$$\begin{aligned} \text{Consider } \int x e^x dx &= x \int e^x dx - \int \left[\frac{d}{dx}(x) \int e^x dx \right] dx \\ &= x e^x - \int [1 \cdot e^x] dx \\ &= x e^x - e^x \end{aligned}$$

$$I = x e^x - e^x \Big|_0^1 = 1 e^1 - e^1 - (0 e^0 - e^0) = 1$$

f) Let $I = \int_3^5 \frac{x^2}{(x-1)(x-2)} dx$

$$\begin{aligned} \text{Consider } \frac{x^2}{(x-1)(x-2)} &= \frac{x^2}{x^2-3x+2} = \frac{x^2-3x+2+3x-2}{x^2-3x+2} \\ &= \frac{x^2-3x+2}{x^2-3x+2} + \frac{3x-2}{x^2-3x+2} = 1 + \frac{3x-2}{(x-1)(x-2)} \end{aligned}$$

$$\text{Let } \frac{3x-2}{(x-1)(x-2)} = \frac{A}{x-1} + \frac{B}{x-2}$$

$$3x-2 = A(x-2) + B(x-1) = (A+B)x + (-2A - B)$$

Comparing, we get $3 = A + B$, $-2 = -2A - B$

Solving we get, $A = -1$, $B = 4$

$$I = \int_3^5 \left(1 + \frac{-1}{x-1} + \frac{4}{x-2} \right) dx$$

$$\begin{aligned} &= [x - \log|x-1| + 4\log|x-2|] \Big|_3^5 \\ &= 5 - \log 4 + 4\log 3 - [3 - \log 2 + 4\log 1] \\ &= 2 - \log 2 + 4\log 3 \end{aligned}$$

Evaluation of Definite Integrals by Substitution

We are aware that one of the important methods for finding the indefinite integral is the method of substitution.

Steps to evaluate definite integral by the method of substitution

1. Consider the integral without limits and substitute, $y = f(x)$ or $x = g(y)$ to reduce the given integral to a known form.
2. Obtain the new limits by putting original limits in the substituted expression.
3. Integrate the new integrand with respect to the new variable without mentioning the constant of integration.
4. Find the values of answer obtained in (3) at the new limits of integral and find the difference of the values at the upper and the lower limits.

TIP : The step of changing the limits and not re-substituting to get the integral in terms original variable may save time and avoid tedious calculations.

Let us understand this, with the help of a few examples.

Example 12

Evaluate the following:

a) $\int_{-1}^1 x^2 \sqrt{x^3 + 1} dx$

b) $\int_{-3}^0 x \sqrt{x+4} dx$

Solution:

a) Let $I = \int_{-1}^1 x^2 \sqrt{x^3 + 1} dx$

Let $x^3 + 1 = t$ implies $3x^2 dx = dt$

when $x = -1$, $t = 0$ and when $x = 1$, $t = 2$

I becomes, $\int_0^2 \sqrt{t} \frac{dt}{3}$

$$I = \frac{1}{3} \frac{2}{3} t^{\frac{3}{2}} \Big|_0^2 = \frac{2}{9} \left[2^{\frac{3}{2}} - 0 \right] = \frac{4\sqrt{2}}{9}$$

c) Let $I = \int_{-3}^0 x \sqrt{x+4} dx$

Let $x + 4 = t \therefore dx = dt$ and $x = t - 4$

When $x = -3$, $t = 1$, when $x = 0$, $t = 4$

I becomes, $\int_1^4 (t-4)\sqrt{t} dt = \int_1^4 (t)^{3/2} dt - \int_1^4 4(t)^{1/2} dt$

$$\begin{aligned} &= \frac{2t^{\frac{5}{2}}}{\frac{5}{2}} \Big|_1^4 - 4 \cdot \frac{2t^{\frac{3}{2}}}{\frac{3}{2}} \Big|_1^4 \\ &= \frac{2t^{\frac{5}{2}}}{5} \Big|_1^4 - \frac{4 \cdot 2t^{\frac{3}{2}}}{3} \Big|_1^4 \\ &= \frac{2 \cdot 4^{\frac{5}{2}}}{5} - \frac{2 \cdot 1^{\frac{5}{2}}}{5} - \left[\frac{8 \cdot 4^{\frac{3}{2}}}{3} - \frac{8 \cdot 1^{\frac{3}{2}}}{3} \right] \\ &= \frac{64}{5} - \frac{2}{5} - \left[\frac{64}{3} - \frac{8}{3} \right] = \frac{62}{5} - \frac{56}{3} \\ &= \frac{-94}{15} \end{aligned}$$

Exercise 3.4

Evaluate the following definite integrals

i) $\int_e^{e^2} \frac{1}{x \log x} dx$

ii) $\int_1^2 e^{-\log x} dx$

iii) $\int_{\log 2}^{\log 4} 2^x dx$

iv) $\int_0^{\sqrt{3}} \frac{x}{(16-x^4)} dx$

$$\text{v) } \int_0^1 \frac{1}{\sqrt{x+1} - \sqrt{x}} dx$$

$$\text{vi) } \int_0^1 e^x \sqrt{1 + e^x} dx$$

$$\text{vii) } \int_4^5 \frac{1}{\sqrt{x^2 - 16}} dx$$

$$\text{viii) } \int_0^1 \log(1+2x) dx$$

$$\text{ix) } \int_0^4 \sqrt{x^2 + 9} dx$$

$$\text{x) } \int_0^1 \frac{3t^2}{(1+t^3)(2+t^3)} dt$$

3.6 Some Properties of Definite Integrals

Here are some important properties of definite integrals. These will be useful in evaluating the definite integrals more easily.

S.N.	Property	Remark/ Proof
P1	$\int_a^b f(x) dx = \int_a^b f(t) dt$	<p>The value of definite integral is independent of the variable.</p> <p>Proof: Let $F(x)$ be an anti-derivative of $f(x)$ w.r.t. x. Then $F(t)$ will be the anti-derivative of $f(t)$ w.r.t. t.</p> $\int_a^b f(x) dx = F(x) _a^b = F(b) - F(a)$ $\int_a^b f(t) dt = F(t) _a^b = F(b) - F(a)$ <p>Hence, $\int_a^b f(x) dx = \int_a^b f(t) dt$</p>
P2	$\int_a^b f(x) dx = - \int_b^a f(x) dx$	<p>Let $F(x)$ be an anti-derivative of $f(x)$ w. r. t. x.</p> <p>Then, by the second fundamental theorem of calculus, we have</p> $\int_a^b f(x) dx = F(b) - F(a)$ $= - [F(a) - F(b)]$ $= - \int_b^a f(x) dx$

P3	$\int_a^b f(x)dx = \int_a^c f(x)dt + \int_c^b f(x)dx$	<p>Let $F(x)$ be anti-derivative of $f(x)$ w. r. t. x.</p> <p>Then $\int_a^b f(x)dx = F(b) - F(a)$ $= [F(b) - F(c)] + [F(c) - F(a)]$ $= \int_a^c f(x)dt + \int_c^b f(x)dx$</p>
P4	$\int_a^b f(x)dx = \int_a^b f(a+b-x)dx$	<p>Let $t = a + b - x$. Then $dt = -dx$.</p> <p>When $x = a$, $t = b$ and when $x = b$, $t = a$.</p> $\therefore \int_a^b f(x)dx = \int_b^a f(a+b-t)(-dt)$ $= -\int_b^a f(a+b-t)dt$ $= +\int_a^b f(a+b-t)dt \text{ by P2}$ $= \int_a^b f(a+b-x)dx \text{ by P1}$
P5	$\int_0^a f(x)dx = \int_0^a f(a-x)dx$	<p>Let $t = a - x$. Then $dt = -dx$.</p> <p>When $x = 0$, $t = a$ and when $x = a$, $t = 0$.</p> $\therefore \int_0^a f(x)dx = \int_a^0 f(a-t)(-dt)$ $= -\int_a^0 f(a-t)dt$ $= +\int_0^a f(a-t)dt \text{ by P2}$ $= \int_0^a f(a-x)dx \text{ by P1}$
P6	$\int_0^{2a} f(x)dx = \int_0^a f(x)dx + \int_0^a f(2a-x)dx$	<p>We may write LHS as $\int_0^a f(x)dx + \int_a^{2a} f(x)dx$</p> <p>Let $t = 2a - x$. Then $dt = -dx$.</p> <p>When $x = a$, $t = a$ and when $x = 2a$, $t = 0$</p>

		$\text{Thus, } \int_a^{2a} f(x)dx = \int_a^U f(2a-t)(-dt)$ $= \int_0^a f(2a-t)dt$ $= \int_0^a f(2a-x)dx$ $\therefore \int_0^{2a} f(x)dx = \int_0^a f(x)dx + \int_0^a f(2a-x)dx$
P7	$\int_0^{2a} f(x)dx = 2 \int_0^a f(x)dx \text{ if } f(2a-x) = f(x)$ $\int_0^{2a} f(x)dx = 0 \text{ if } f(2a-x) = -f(x)$	<p>We know that</p> $\int_0^{2a} f(x)dx = \int_0^a f(x)dx + \int_0^a f(2a-x)dx \text{ by P6}$ <p>Case i) Let $f(2a-x) = f(x)$</p> $\therefore \int_0^{2a} f(x)dx = \int_0^a f(x)dx + \int_0^a f(x)dx$ $= 2 \int_0^a f(x)dx$ <p>Case ii) Let $f(2a-x) = -f(x)$</p> $\therefore \int_0^{2a} f(x)dx = \int_0^a f(x)dx - \int_0^a f(x)dx = 0$
P8	$\int_{-a}^a f(x)dx = 2 \int_0^a f(x)dx \text{ if } f(x) \text{ is even}$ $\int_{-a}^a f(x)dx = 0 \text{ if } f(x) \text{ is odd}$ <p>Note:</p> <p>A function $f(x)$ is said to be even if</p> $f(-x) = f(x)$ <p>eg. $f(x) = x^2$ is even as $f(-x)$</p> $= (-x)^2 = x^2 = f(x)$ <p>A function $f(x)$ is said to be odd if</p> $f(-x) = -f(x)$ <p>e.g., $f(x) = x^3$ is odd as $f(-x)$</p> $= (-x)^3 = -x^3 = -f(x)$	<p>We may write</p> $\int_{-a}^a f(x)dx = \int_{-a}^0 f(x)dx + \int_0^a f(x)dx$ <p>Consider $\int_{-a}^0 f(x)dx$ and put $x = -t$ which gives $dx = -dt$</p> <p>When, $x = -a$, $t = a$ and when $x = 0$, $t = 0$</p> $\int_{-a}^0 f(x)dx = \int_a^0 f(-t)(-dt) = \int_0^a f(-t)dt = \int_0^a f(-x)dx$ $\therefore \int_{-a}^a f(x)dx = \int_0^a f(-x)dx + \int_0^a f(x)dx$ <p>Case i) $f(x)$ is even i.e. $f(-x) = f(x)$. Hence,</p> $\therefore \int_{-a}^a f(x)dx = \int_0^a f(x)dx + \int_0^a f(x)dx = 2 \int_0^a f(x)dx$ <p>Case ii) $f(x)$ is odd i.e. $f(-x) = -f(x)$. Hence,</p> $\therefore \int_{-a}^a f(x)dx = - \int_0^a f(x)dx + \int_0^a f(x)dx = 0$

Let us illustrate the use of these properties with the help of some examples.

Example 13

Evaluate the following definite integrals

a) $\int_0^4 |x - 2| dx$ b) $\int_{-1}^2 |x^3 - x| dx$

Solution: a) Let $I = \int_0^4 |x - 2| dx$

We know that $|x - 2| = \begin{cases} (x - 2), & x \geq 2 \\ -(x - 2), & x < 2 \end{cases}$

$$\begin{aligned} I &= \int_0^2 |x - 2| dx + \int_2^4 |x - 2| dx \quad \text{by } P_3 \\ &= \int_0^2 -(x - 2) dx + \int_2^4 (x - 2) dx \\ &= -\left. \frac{(x - 2)^2}{2} \right|_0^2 + \left. \frac{(x - 2)^2}{2} \right|_2^4 \\ &= -\left[\frac{(2 - 2)^2}{2} - \frac{(0 - 2)^2}{2} \right] + \left[\frac{(4 - 2)^2}{2} - \frac{(2 - 2)^2}{2} \right] \\ &= 2 + 2 = 4 \end{aligned}$$

b) Let $I = \int_{-1}^2 |x^3 - x| dx$

Let $x^3 - x = 0$ gives $x = -1, 0, 1$

Clearly, $|x^3 - x| = \begin{cases} -(x^3 - x), & x \leq -1 \\ (x^3 - x), & -1 \leq x \leq 0 \\ -(x^3 - x), & 0 \leq x \leq 1 \\ (x^3 - x), & x \geq 1 \end{cases}$

As $0, 1 \in (-1, 2)$

We may write, $I = \int_{-1}^0 |x^3 - x| dx + \int_0^1 |x^3 - x| dx + \int_1^2 |x^3 - x| dx$ by P_3

$$\begin{aligned} &= \int_{-1}^0 (x^3 - x) dx + \int_0^1 -(x^3 - x) dx + \int_1^2 (x^3 - x) dx \\ &= \left[\frac{x^4}{4} - \frac{x^2}{2} \right] \Big|_{-1}^0 - \left[\frac{x^4}{4} - \frac{x^2}{2} \right] \Big|_0^1 + \left[\frac{x^4}{4} - \frac{x^2}{2} \right] \Big|_1^2 \\ &= \left[\frac{0^4}{4} - \frac{0^2}{2} \right] - \left[\frac{(-1)^4}{4} - \frac{(-1)^2}{2} \right] - \left[\frac{1^4}{4} - \frac{1^2}{2} \right] + \left[\frac{0^4}{4} - \frac{0^2}{2} \right] + \left[\frac{2^4}{4} - \frac{2^2}{2} \right] - \left[\frac{1^4}{4} - \frac{1^2}{2} \right] \\ &= \frac{1}{4} + \frac{1}{4} + 2 + \frac{1}{4} = \frac{11}{4} \end{aligned}$$

Example 14

Evaluate $\int_{-1}^1 \frac{e^x}{e^x + e^{-x}} dx$

Solution Let $I = \int_{-1}^1 \frac{e^x}{e^x + e^{-x}} dx \dots\dots\dots(1)$

Here $a = -1, b = 1$

Replacing x by $a + b - x$ i.e. $0 - x$, we get

$$I = \int_{-1}^1 \frac{e^{-x}}{e^{-x} + e^{-(-x)}} dx \text{ by } P_4$$

$$I = \int_{-1}^1 \frac{e^{-x}}{e^{-x} + e^x} dx \dots\dots\dots(2)$$

Adding (1) and (2), we get

$$2I = \int_{-1}^1 \frac{e^x + e^{-x}}{e^{-x} + e^x} dx$$

$$2I = \int_{-1}^1 1 dx$$

$$2I = x \Big|_{-1}^1$$

$$2I = 1 - (-1) = 2$$

$$I = 1$$

Example 15

Evaluate $\int_0^1 \frac{\log x}{\log x + \log(1-x)} dx$

Solution Let $I = \int_0^1 \frac{\log x}{\log x + \log(1-x)} dx \dots\dots\dots(1)$

Replacing x by $1-x$, we get

$$I = \int_0^1 \frac{\log(1-x)}{\log(1-x) + \log(1-(1-x))} dx \text{ by } P_3$$

$$I = \int_0^1 \frac{\log(1-x)}{\log(1-x) + \log x} dx \dots\dots\dots(2)$$

Adding (1) and (2), we get

$$2I = \int_0^1 \frac{\log x + \log(1-x)}{\log(1-x) + \log x} dx$$

$$2I = \int_0^1 1 dx$$

$$2I = x|_0^1$$

$$2I = 1$$

$$I = \frac{1}{2}$$

Example 16

$$\int_1^3 \frac{\sqrt[3]{x}}{\sqrt[3]{x} + \sqrt[3]{4-x}} dx$$

$$\text{Let } I = \int_1^3 \frac{\sqrt[3]{x}}{\sqrt[3]{x} + \sqrt[3]{4-x}} dx \dots\dots\dots(1)$$

Here $a = 1$, $b = 3$

Replacing x by $a + b - x$ i.e. $4 - x$, we get

$$I = \int_1^3 \frac{\sqrt[3]{4-x}}{\sqrt[3]{4-x} + \sqrt[3]{4-(4-x)}} dx \text{ by } P_4$$

$$I = \int_1^3 \frac{\sqrt[3]{4-x}}{\sqrt[3]{4-x} + \sqrt[3]{x}} dx \dots\dots\dots(2)$$

Adding (1) and (2), we get

$$2I = \int_1^3 \frac{\sqrt[3]{x} + \sqrt[3]{4-x}}{\sqrt[3]{4-x} + \sqrt[3]{x}} dx$$

$$2I = \int_1^3 1 dx$$

$$2I = x|_1^3$$

$$2I = 3 - 1 = 2 \text{ gives } I = 1$$

Exercise 3.5

Q1. Evaluate the following definite integrals:

$$i) \int_0^3 f(x) dx \text{ where } f(x) = \begin{cases} x+1 & x < 1 \\ 2x & x \geq 1 \end{cases}$$

$$ii) \int_0^1 x\sqrt{1-x} dx$$

$$iii) \int_0^4 |x-2| dx$$

$$\text{iv) } \int_1^5 \frac{\sqrt{x}}{\sqrt{x} + \sqrt{6-x}} dx$$

$$\text{v) } \int_0^a \frac{x^{2020}}{x^{2020} + (a-x)^{2020}} dx$$

$$\text{vi) } \int_0^4 (|x| + |x-2| + |x-4|) dx$$

$$\text{vii) } \int_{-2}^2 \frac{1}{1+\sqrt{e^x}} dx$$

$$\text{viii) } \int_{-1}^1 \frac{x^3 + |x| + 1}{x^2 + 2|x| + 1} dx$$

$$\text{ix) } \int_0^1 x(1-x)^n dx$$

$$\text{x) } \int_{-2}^2 \left(x^3 + \frac{1}{2}\right) \sqrt{4+x^2} dx$$

$$\text{xi) } \int_{-1}^1 \log \frac{1-x}{1+x} dx$$

$$\text{xii) } \int_{-\frac{1}{4}}^{\frac{1}{4}} \frac{x^2}{1+e^x} dx$$

Q2. Evaluate $\int_0^2 [x] dx$ where $[.]$ denotes Greatest integer function

3.7 CONSUMERS' SURPLUS AND PRODUCERS' SURPLUS

CONSUMERS' SURPLUS (CS)

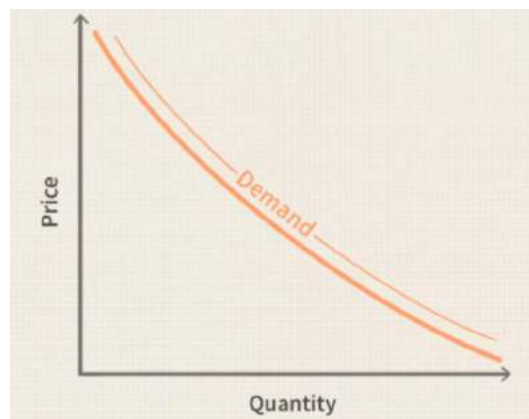
Let us first recall Demand Curve

What Is the Demand Curve?

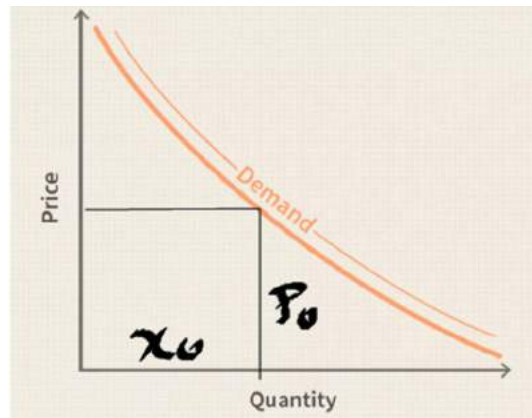
The demand curve is a graphical representation of the relationship between the price of a good or service and the quantity demanded for a given period of time. In a typical representation, the price will appear on the left vertical axis, the quantity demanded on the horizontal axis.

Understanding the Demand Curve

We know that as per the law of demand as the price of a given commodity increases, the quantity demanded decreases, all else being equal. Thus, the demand curve will move downward from the left to the right as shown in the figure given below:



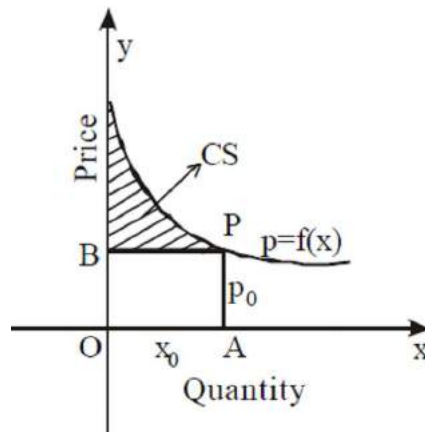
Let us assume that the prevailing market price is p_0 . Let the quantity of commodity sold at price p_0 , as determined by demand curve be x_0 as shown in figure below.



A consumer surplus happens when the price that consumers pay for a product or service is less than the price, they're willing to pay. It is the measure of the additional benefit that consumers receive because they are paying less for something than what they were willing to pay. Consumers' surplus always increases as the price of a good falls and decreases as the price of a good rises.

However, there are buyers who would be willing to pay a price higher than p_0 . These buyers will gain from the fact that the prevailing market price is only p_0 . This gain is called Consumers' Surplus.

It is represented by the area below the demand curve $p = f(x)$ and above the line $p = p_0$.



Thus, Consumers' Surplus, $CS = [\text{Total area under the demand function bounded by } x = 0, x = x_0 \text{ and } x\text{-axis} - \text{Area of the rectangle } OAPB]$

$$\therefore CS = \int_0^{x_0} f(x) dx - p_0 x_0$$

Example 17

Find the consumers' surplus for the demand function $p = 25 - x - x^2$ when $p_0 = 19$.

Solution: Given that, the demand function is $p = 25 - x - x^2$, $p_0 = 19$

$$\begin{aligned} \therefore 19 &= 25 - x - x^2 \\ \Rightarrow x^2 + x - 6 &= 0 \end{aligned}$$

$$\Rightarrow (x + 3)(x - 2) = 0$$

$$\Rightarrow x = 2 \text{ (or) } x = -3$$

$$\therefore x_0 = 2 \text{ [demand cannot be negative]}$$

$$\therefore p_0 x_0 = 19 \times 2 = 38$$

$$CS = \int_0^2 (25 - x - x^2) dx - 38 = 25x - \frac{x^2}{2} - \frac{x^3}{3} \Big|_0^2 - 38 = 50 - 2 - \frac{8}{3} - 38 = \frac{22}{3}$$

Example 18

The demand function for a commodity is $p = \frac{10}{x+1}$.

Find the consumers' surplus when the prevailing market price is 5.

Solution: Given that, Demand function, $p = \frac{10}{x+1}$

$$p_0 = 5 \Rightarrow 5 = \frac{10}{x+1} \Rightarrow x = 1 \text{ i.e. } x_0 = 1$$

$$p_0 x_0 = 5$$

$$CS = \int_0^1 \frac{10}{x+1} dx - p_0 x_0$$

$$= 10 [\log(x + 1)] \Big|_0^1 - 5.$$

$$= 10[\log 2 - \log 1] - 5 = 10 \log 2 - 5$$

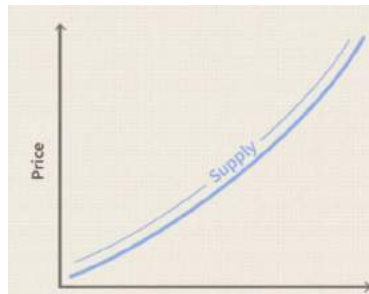
PRODUCERS' SURPLUS (PS)

What Is the Supply Curve?

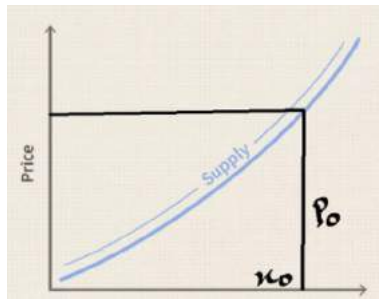
The supply curve is a graphical representation of the relationship between the price of a good or service and the quantity supplied for a given period of time. In a typical representation, the price will appear on the left vertical axis, the quantity supplied on the horizontal axis.

Thus, a supply curve for a commodity shows the quantity of the commodity that will be brought into the market at any given price p .

As the price of a given commodity increases, the quantity supplied increases (all else being equal).

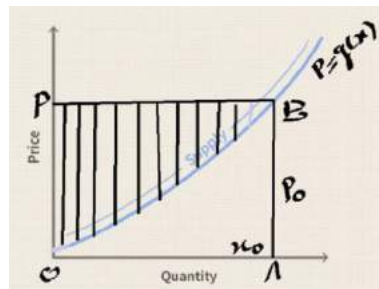


Suppose the prevailing market price is p_0 . At this price a quantity x_0 of the commodity, determined by the supply curve, will be offered to buyers as shown in figure below.



However, there are producers who are willing to supply the commodity at a price lower than p_0 . All such producers will gain from the fact that the prevailing market price is only p_0 . This gain is called 'Producers' Surplus'.

It is represented by the area above the supply curve $p = g(x)$ and below the line $p = p_0$ as shaded in figure below.



Thus, Producers' Surplus, PS = [Area of the whole rectangle OAPB - Area under the supply curve bounded by $x = 0$, $x = x_0$ and x -axis]

$$\text{i.e. PS} = p_0 x_0 - \int_0^{x_0} g(x) dx$$

Example 19

The supply function for a commodity is $p = x^2 + 4x + 5$ where x denotes supply. Find the producers' surplus when the price is 10.

Solution: Given that, Supply function, $p = x^2 + 4x + 5$

$$\text{For } p_0 = 10, \text{ we have } 10 = x^2 + 4x + 5 \Rightarrow x^2 + 4x - 5 = 0$$

$$\Rightarrow (x + 5)(x - 1) = 0 \Rightarrow x = -5 \text{ or } x = 1$$

Since supply cannot be negative, $x = -5$ is not possible.

$$\Rightarrow x = 1$$

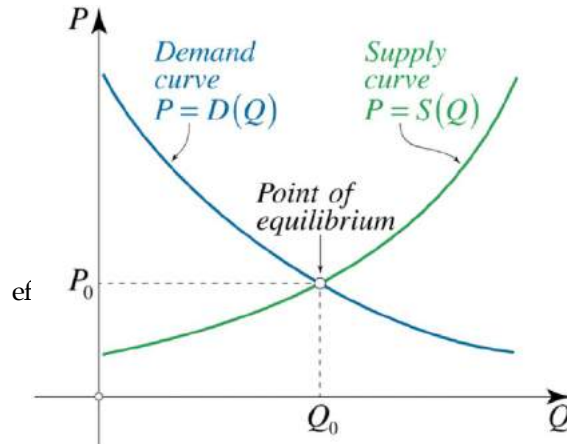
$$\text{As } p_0 = 10 \text{ and } x_0 = 1 \text{ ? } p_0 x_0 = 10$$

$$\text{Producers' Surplus, PS} = p_0 x_0 - \int_0^{x_0} g(x) dx = 10 - \int_0^1 (x^2 + 4x + 5) dx$$

$$= 10 - \left[\frac{x^3}{3} + 2x^2 + 5x \right]_0^1 = 10 - \left[\frac{1}{3} + 2 + 5 \right] = \frac{8}{3}$$

Equilibrium Price and Quantity

On a graph, the point where the supply curve $P = S(Q)$ and the demand curve $P = D(Q)$ intersect is the equilibrium. The equilibrium price is the price where the amount of the product that consumers want to buy (quantity demanded) is equal to the amount producers want to sell (quantity supplied). This mutually desired quantity is called the equilibrium quantity.



Refer to following link for further details

ÿ <https://www.youtube.com/watch?v=W5nHpAn6FvQ&t=20s>

Steps to find equilibrium price and quantity

- 1) Solve for the demand function and the supply function in terms of Price (p).
- 2) Equate x_s (quantity supplied) to x_d (quantity demanded). The equations will be in terms of price (p)
- 3) Solve for p , the value so obtained will be called equilibrium price.
- 4) Substitute equilibrium price into either demand or supply function (or both—but most times it will be easier to put into supply function) and solve for x , which will give required equilibrium quantity.

Example 20

Suppose that demand is given by the equation $x_d = 500 - 50P$, where x_d is quantity demanded, and P is the price of the good. Supply is described by the equation $x_s = 50 + 25P$ where x_s is quantity supplied. What is the equilibrium price and quantity?

Solution : 20 We know that, for equilibrium price $x_d = x_s$

$$\text{hence we get, } 500 - 50P = 50 + 25P$$

$$\text{i.e. } 450 = 75P \text{ which gives } P = 6$$

$$\text{putting } P = 6 \text{ in } x_d = 500 - 50P \text{ we get } x = 500 - 50(6) = 200$$

Exercise 3.6

- 1) If the demand function is $p = 35 - 2x - x^2$ and the demand x_0 is 3, find the consumers' surplus.
- 2) If the demand function for a commodity is $p = 25 - x^2$, find the consumers' surplus for $p_0 = 9$.
- 3) The demand function for a commodity is $p = 10 - 2x$. Find the consumers' surplus for (i) $p = 2$ (ii) $p = 6$.
- 4) The demand function for a commodity is $p = 80 - 3x - x^2$. Find the consumers' surplus for $p = 40$.
- 5) If the supply function is $p = 3x^2 + 10$ and $x_0 = 4$, find the producers' surplus.
- 6) If the supply function is $p = 4 - 5x + x^2$, find the producers' surplus when the price is 18.
- 7) If the demand and supply curve for computers is $D = 100 - 6P$, $S = 28 + 3P$ respectively where P is the price of computers, what is the quantity of computers bought and sold at equilibrium?

CASE BASED QUESTION

Question: The second new species named *Puntius euspilurus* is an edible freshwater fish found in the Mananthavady river in Wayanad. The epithet *euspilurus* is a Greek word referring to the distinct black spot on the caudal fin. The slender bodied fish prefers fast flowing, shallow and clear waters and occurs only in unpolluted areas. It appears in great numbers in paddy fields during the onset of the Southwest monsoon.



Suppose that the supply schedule of this Fish is given in the table below which follows a linear relationship between price and quantity supplied.

PRICE P PER KG (IN ₹)	QUANTITY (X) OF FISH SUPPLIED (IN KG)
25	800
20	700
15	600
10	500
5	400

Suppose that this Fish can be sold only in the Kerala. The Kerala demand schedule for this Fish is as follows and there is a linear relationship between price and quantity demanded.

PRICE(p) PER KG (IN ₹)	QUANTITY (x) OF FISH DEMANDED (IN KG)
25	200
20	400
15	600
10	800
5	1000

Q1. Which of the following represents the Price (p) - supply(x) relationship?

a) $p = 65 - \frac{x}{20}$

b) $p = 65 + \frac{x}{20}$

c) $p = -15 + \frac{x}{20}$

d) $p = 15 - \frac{x}{20}$

Q2. The equation of demand curve can be given by

a) $p = 30 - \frac{x}{40}$

b) $p = 30 + \frac{x}{40}$

c) $p = 20 - \frac{x}{40}$

d) $p = 20 + \frac{x}{40}$

Q3. The value of x at equilibrium is

a) 1400/3

b) 600

c) 15

d) 200/3

Q4. The equilibrium price is

a) 400

b) 20

c) 600

d) 15

Q5. The consumers' surplus at equilibrium price is

a) 18009

b) 13500

c) 9000

d) 4500

Miscellaneous Exercise

Q1. Integrate the following

i) $x^3 e^{x^2}$

ii) $\int \frac{(x^4 - x)^{\frac{5}{4}}}{x^5} dx$

iii) $\int \frac{x^3 + x}{x^4 - 9} dx$

iv) $\int \frac{2^x}{\sqrt{4^x - 1}} dx$

v) $\int \frac{1}{(e^x + 1)^2} dx$

vi) $\int (1 + x) \log x dx$

Q2. Evaluate the following

i) $\int_2^3 \frac{x^3 + 1}{x(x - 1)} dx$

ii) $\int_{1/3}^1 \frac{(x - x^3)^{1/3}}{x^4} dx$

iii) $\int_0^1 \log \left(\frac{1}{x} - 1 \right) dx$

iv) $\int_0^2 x^2 \sqrt{2 - x} dx$

v) $\int_{-1}^1 \frac{1}{1 + e^{x^3}} dx$

vi) $\int_{-1}^1 \sqrt{|x| - x} dx$

Q3. Show that $\int \frac{(a^x + b^x)^2}{a^x b^x} dx = \frac{\left(\frac{a}{b}\right)^x - \left(\frac{b}{a}\right)^x}{\log a - \log b} + 2x + C$

Q4. A firm finds that quantity demanded and quantity supplied are 30 units when market price is ₹ 8 per unit. Further, if price is increased to ₹ 12 per unit, demand reduces to 0 and at a price of ₹ 5 per unit, the firm is not willing to produce. Assuming the linear relationship between price and quantity in both cases, find the demand function, supply function and consumers' surplus and producers' surplus at equilibrium price.

SUMMARY

- This reverse process of differentiation is termed as Integration.
- A function f which on differentiating gives f' is called anti-derivative (or primitive) of the function.
- If $\frac{d}{dx}(F(x) + C) = f(x)$ then anti-derivative of $f(x) = F(x) + C$ which is also called indefinite integral because C can take any arbitrary value.

➤ Formulae of Integration

$$\int x^n dx = \frac{x^{n+1}}{n+1} + C \text{ where } n \neq -1$$

$$\int 1 dx = x + C$$

$$\int e^x dx = e^x + C$$

$$\int a^x dx = \frac{a^x}{\log a} + C$$

$$\int \frac{1}{x} dx = \log|x| + C$$

$$\int \frac{1}{\sqrt{x^2+a^2}} dx = \log(x + \sqrt{x^2 + a^2}) + C$$

$$\int \frac{1}{\sqrt{x^2-a^2}} dx = \log(x + \sqrt{x^2 - a^2}) + C$$

$$\int \sqrt{x^2 + a^2} dx = \frac{x}{2} \sqrt{x^2 + a^2} + \frac{a^2}{2} \log|x + \sqrt{x^2 + a^2}| + C$$

$$\int \sqrt{x^2 - a^2} dx = \frac{x}{2} \sqrt{x^2 - a^2} - \frac{a^2}{2} \log|x + \sqrt{x^2 - a^2}| + C$$

$$\int \frac{1}{x^2 - a^2} dx = \frac{1}{2a} \log \left| \frac{x-a}{x+a} \right| + C$$

$$\int \frac{1}{a^2 - x^2} dx = \frac{1}{2a} \log \left| \frac{a+x}{a-x} \right| + C$$

Type of Rational Function	Corresponding Partial Fractions Decomposition
$\frac{px + q}{(x + a)(x + b)}$	$\frac{A}{x+a} + \frac{B}{x+b}$
$\frac{px^2 + qx + c}{(x + a)(x + b)(x + c)}$	$\frac{A}{x+a} + \frac{B}{x+b} + \frac{C}{x+c}$

$\frac{px + q}{(x + a)^2}$	$\frac{A}{x+a} + \frac{B}{(x+a)^2}$
$\frac{px^2 + qx + c}{(x + a)(x + b)^2}$	$\frac{A}{x+a} + \frac{B}{x+b} + \frac{C}{(x+b)^2}$
$\frac{px^2 + qx + c}{(x + a)(x^2 + b)}$	$\frac{A}{x+a} + \frac{Bx + C}{(x^2 + b)}$

➤ INTEGRATION BY PARTS: $\int f(x)g(x)dx = f(x)\int g(x)dx - \int [f'(x) \cdot \int g(x) dx]dx$

➤ A definite integral is denoted by $\int_a^b f(x)dx$ where a is called the lower limit of the integral and b is called the upper limit of the integral.
Definite Integral has a fixed value.

➤ Let f be continuous function defined on the closed interval $[a, b]$ and F be an anti-derivative of f . Then, $\int_a^b f(x)dx = F(x)|_a^b = F(b) - F(a)$.

➤ Properties of Definite Integral

$$\int_a^b f(x)dx = \int_a^b f(t)dt$$

$$\int_a^b f(x)dx = -\int_b^a f(x)dx$$

$$\int_a^b f(x)dx = \int_a^c f(x)dx + \int_c^b f(x)dx \quad \text{where } a < c < b$$

$$\int_a^b f(x)dx = \int_a^b f(a + b - x)dx$$

$$\int_0^a f(x)dx = \int_0^a f(a - x)dx$$

$$\int_0^{2a} f(x)dx = \int_0^a f(x)dx + \int_0^a f(2a - x)dx$$

$$\int_0^{2a} f(x)dx = \begin{cases} 2\int_0^a f(x)dx & \text{if } f(2a-x) = f(x) \\ = 0 & \text{if } f(2a-x) = -f(x) \end{cases}$$

$$\int_{-a}^a f(x)dx = \begin{cases} 2\int_0^a f(x)dx & \text{if } f(x) \text{ is even} \\ = 0 & \text{if } f(x) \text{ is odd} \end{cases}$$

➤ Cost Function, $C(x) = \int MC(x)dx$ where MC is Marginal Cost

➤ Revenue Function, $R(x) = \int MR(x)dx$ where MR is Marginal Revenue

➤ Consumers' Surplus, $CS = \int_0^{x_0} f(x)dx - p_0x_0$ where $f(x)$ is the demand curve

➤ Producers' Surplus, $PS = p_0x_0 - \int_0^{x_0} g(x)dx$ where $g(x)$ is the supply curve

➤ The equilibrium price is the price where the amount of the product that consumers want to buy (quantity demanded) is equal to the amount producers want to sell (quantity supplied). This mutually desired amount is called the equilibrium quantity.

ANSWERS

EXERCISE 3.1

Q1 i) $\frac{x^4}{4} - \frac{2x^3}{3} + \frac{x^2}{2} - 2x + C$

ii) $\frac{x^3}{3} - \frac{1}{x} + 2x + C$

iii) $\frac{x^3}{3} + x + C$

iv) $\frac{2(3x+5)^{\frac{3}{2}}}{9} + C$

v) $\frac{x^5}{5} + \frac{1}{3x^3} + C$

vi) $\frac{2}{21} [(x+4)^{\frac{3}{2}} + (x-3)^{\frac{3}{2}}] + C$

Q2 i) $\frac{1}{2} \log(x^2 + e^{2x}) + C$

ii) $2\log(\sqrt{x} + 1) + C$

iii) $\frac{-1}{1+x e^x} + C$

iv) $\frac{3(1+x^2)^{\frac{2}{3}}}{2} + C$

v) $\frac{1}{2} \log|e^{2x} - e^{-2x}| + C$

vi) $\frac{-x}{8} + \frac{7}{8} \log|4e^x + 5e^{-x}| + C$

vii) $\log|x^2 - 3x - 18| + C$

viii) $\frac{-1}{1+\log x} + C$

ix) $\frac{1}{a} \log(a^x + x^a) + C$

Q3. i) $\log |x + \sqrt{x^2 + 1}| - 2\sqrt{x^2 + 1} + C$

i) $\frac{1}{\sqrt{3}} \log \left| x + \frac{1}{3} + \sqrt{x^2 + \frac{2x}{3} - \frac{1}{3}} \right| + C$

Q4. $R(x) = 40x - \frac{10x^3}{3} + 90$

Q5. $C(x) = \sqrt{x^2 + 2500} + 950$, Average Cost = $\frac{\sqrt{x^2 + 2500} + 950}{x}$

Q6. $\frac{4}{5}(x + 1)^{\frac{5}{2}} - \frac{4}{5}(x + 1)^{\frac{3}{2}} + \frac{116776}{15}$

EXERCISE 3.2

Q1 i) $\frac{-1}{2} \log|x + 2| + \frac{3}{2} \log|x + 4| + C$ ii) $\frac{1}{2} \log|x^2 + 1| - \frac{1}{2} \log|x^2 + 2| + C$

ii) $-x + \frac{1}{2} \log(e^{2x} - 1) + C$ iv) $\log|\log x - 2| - \log|\log x - 1| + C$

v) $\frac{1}{2} \log|x - 2| - \frac{1}{x - 2} - \frac{1}{2} \log|x + 2| + C$

vi) $-x - e^x + \log|e^x + 1| + c$

vii) $\frac{3}{2} \log|x - 1| + \frac{1}{2} \log|x + 1| - 2 \log|x + 2| + C$

viii) $\frac{1}{2} \log|x - 2| - \frac{1}{3(x - 1)} - \frac{2}{9} \log|x + 2| + C$

ix) $\frac{1}{4} \log \left| 1 - \frac{1}{x^4} \right| + C$

x) $\frac{1}{n} \log \left| 1 - \frac{1}{x^n} \right| + C$

xi) $\log|x| - \frac{1}{2} \log|1 - 2x| + C$

EXERCISE 3.3

Q1 i) $\frac{xe^{2x+3}}{2} - \frac{e^{2x+3}}{4} + C$

ii) $\frac{x^2 + 1}{2} [\log(x^2 + 1) - 1] + C$

iii) $x^2 e^x - 2x e^x + 2e^x + C$

iv) $\frac{x^2}{2} \log x - \frac{x^2}{4} + C$

v) $\frac{x^2}{2} \log 2x - \frac{x^2}{4} + C$

vi) $\frac{x^3}{3} \log x - \frac{x^3}{6} + C$

vii) $\left[\frac{x^3}{3} + x \right] \log x - \frac{x^2}{9} - x + C$

viii) $\frac{x^2 (\log x)^2}{2} - \frac{x^2}{2} \log x + \frac{x^2}{4} + C$

Q2 i) $\frac{e^x}{x^2} + C$

ii) $\frac{e^{3x} \log 3x}{3} + C$

iii) $\frac{e^{2x}}{2x} + C$

iv) $x[\log \log x - \frac{1}{\log x}] + C$

EXERCISE 3.4

i) $\log 2$

ii) $\log 2$

iii) $\frac{2^{\log 4} - 2^{\log 2}}{\log 2}$

iv) $\frac{1}{16} \log 7$

v) $\frac{4\sqrt{2}}{3}$

vi) $\frac{2}{3}[(1+e)^{3/2} - 2\sqrt{2}]$

vii) $\log 2$

viii) $\frac{3}{2} \log 3 - 1$

ix) $10 + \frac{9}{2} \log 3$

x) $\log \frac{4}{3}$

EXERCISE 3.5

Q1. i) $\frac{19}{2}$

ii) $\frac{4}{15}$

iii) 4

iv) 2

v) $\frac{a}{2}$

vi) 20

vii) 2

viii) $2 \log 2$

ix) $\frac{1}{(n+1)(n+2)}$

x) $2\sqrt{2} + 2 \log |1 + \sqrt{2}|$

xi) 0

xii) $\frac{1}{96}$

Q2. 1

EXERCISE 3.6

1. 27

2. $\frac{128}{3}$

3. i) 16 ii) 4

4. $\frac{725}{6}$

5. 128

6. $\frac{637}{6}$

7. 52

CASE BASED QUESTION

1. c 2. a 3. b 4. d 5. d

MISCELLANEOUS EXERCISE

Q1. i) $\frac{1}{2} e^{x^2} (x^2 - 1) + C$

ii) $\frac{4}{15} \left(1 - \frac{1}{x^5}\right)^{\frac{5}{4}} + C$

iii) $\frac{1}{4} \log |x^4 - 9| + \frac{1}{12} \log \left| \frac{x^2 - 3}{x^2 + 3} \right| + C$

iv) $\frac{\log |2^x + \sqrt{4^x - 1}|}{\log 2} + C$

v) $\log \frac{e^x}{e^x + 1} + \frac{1}{e^x + 1} + C$

vi) $\left(x + \frac{x^2}{2}\right) \log x - x - \frac{x^2}{4} + C$

Q2. i) $\frac{7}{2} + 3 \log 2 - \log 3$

ii) 6

iii) 0

iv) $\frac{128\sqrt{2}}{105}$

v) 1

vi) $\frac{2\sqrt{2}}{3}$

Q4. Demand Function: $p = 12 - \frac{2x}{15}$

Supply Function: $p = \frac{x}{10} + 5$

Consumers' Surplus = 60

Producers' Surplus = 45

□□□