


دس سے بیس تک کے اعداد





5




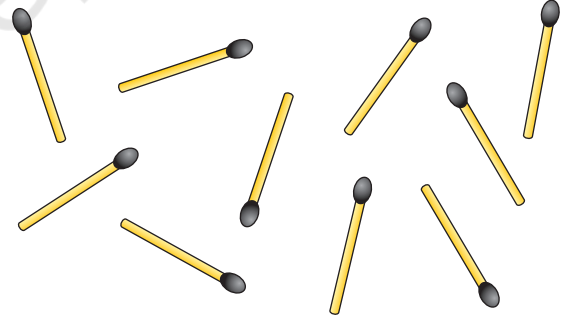
دس کا گٹھ




دس کا چٹھا








دس کا گٹھ



دس کا گچھا



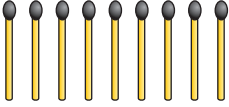

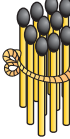
10 کا ایک گروپ بنائیے۔





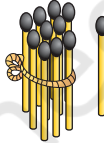
10 سے 20 تک کی گنتی





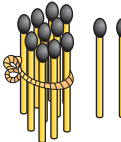
خالی جگہوں کو بھریے۔


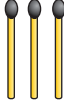
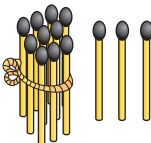
9 + 1 = 10


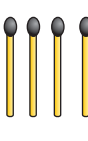
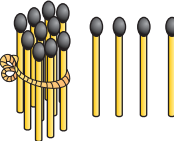
10 + 1 =

10 + 2 = 12

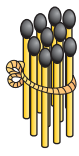
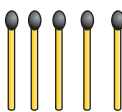
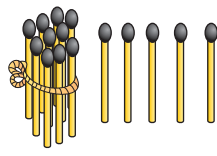
10 + 3 =

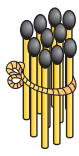

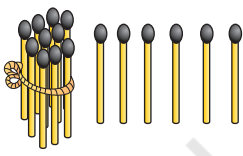




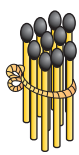
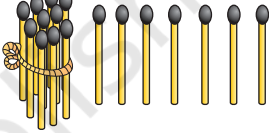
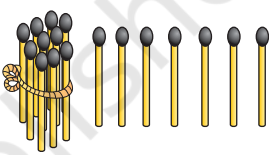
10 + 4 = 14

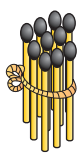
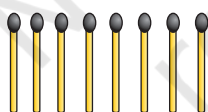
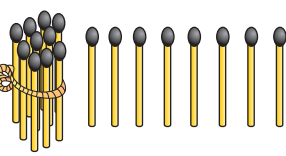


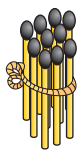
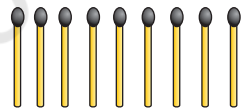
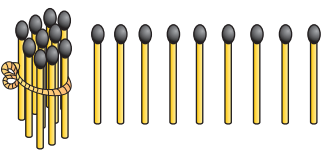
خالی جگہوں کو پھریے۔

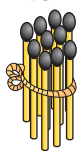
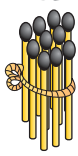
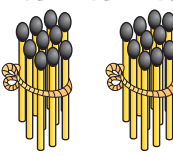
  
 $10 + 5 = 15$

  
 $10 + 6 = \bigcirc$

  
 $10 + 7 = 17$


  
 $10 + 8 = \bigcirc$

  
 $10 + 9 = 19$


  
 $10 + 10 = 20$




10 کا ایک گروپ بنائیے اور اعداد لکھیے۔




دہائی	اکائی
1	3



دہائی	اکائی



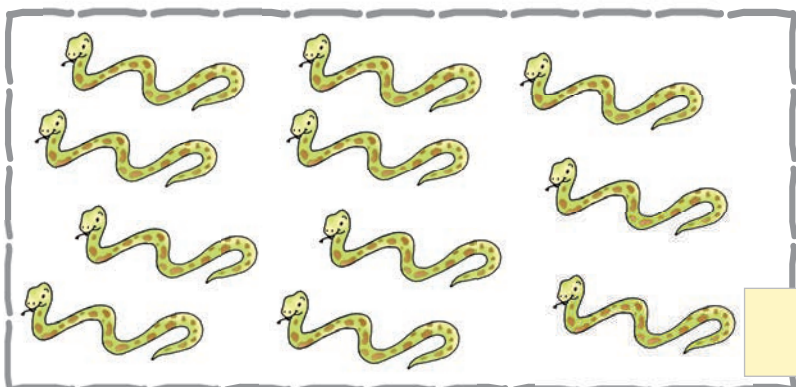
دہائی	اکائی




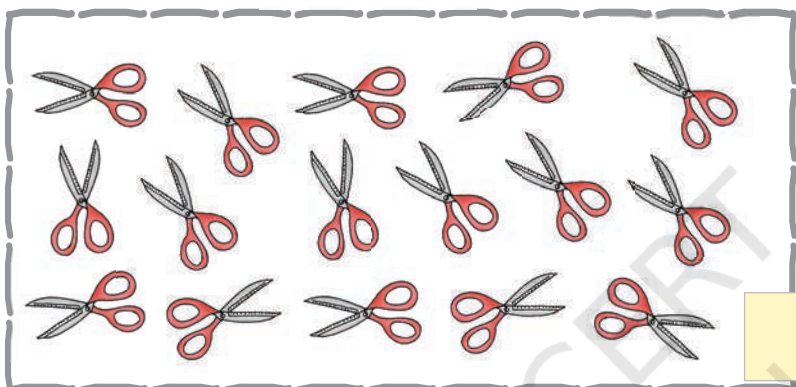
دہائی	اکائی




10 کا ایک گروپ بنائیے اور اعداد لکھیے۔



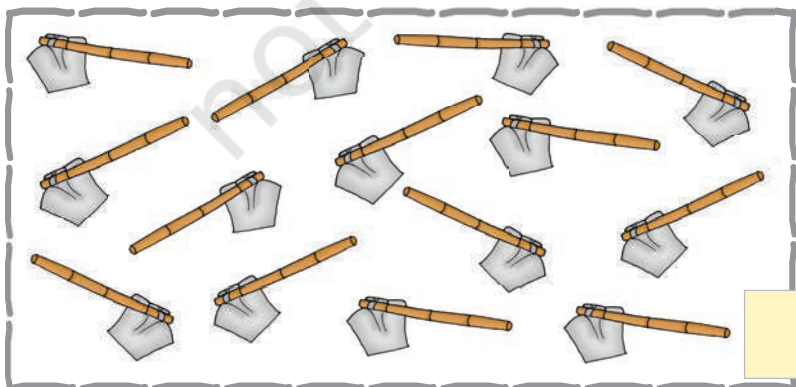
دہائی	اکائی



دہائی	اکائی



دہائی	اکائی



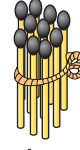
دہائی	اکائی



جدول کو مکمل کیجیے



$10 =$



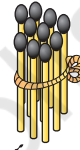
1 دہائی

10	10			

$11 =$



1 اکائی



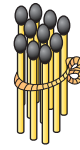
1 دہائی

11	11			

$12 =$



2 اکائی



2 دہائی

12	12			



جدول کو مکمل کیجیے



$$13 = \begin{array}{c} \text{3} \\ \text{اکائی} \end{array} + \begin{array}{c} \text{1} \\ \text{دہائی} \end{array}$$

13	13			

$$14 = \begin{array}{c} \text{4} \\ \text{اکائی} \end{array} + \begin{array}{c} \text{1} \\ \text{دہائی} \end{array}$$

14	14			

$$15 = \begin{array}{c} \text{5} \\ \text{اکائی} \end{array} + \begin{array}{c} \text{1} \\ \text{دہائی} \end{array}$$

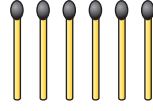
15	15			



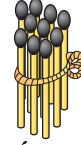
جدول کو مکمل کیجیے



16 =



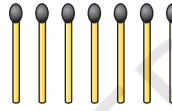
6 اکائی



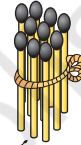
1 دہائی

16	16			

17 =



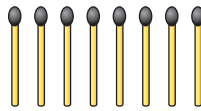
7 اکائی



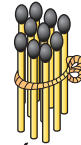
1 دہائی

17	17			

18 =



8 اکائی



1 دہائی

18	18			



جدول کو مکمل کیجیے



$$19 = \begin{array}{c} \text{9 ایکائی} \\ \text{1 دہائی} \end{array}$$

19	19			

$$20 = \begin{array}{c} \text{0 ایکائی} \\ \text{2 دہائی} \end{array}$$

20	20			



زیادہ چیزوں والے گروپ پر صحیح کا نشان (✓) لگائیے۔

<input type="checkbox"/>	<input type="checkbox"/>

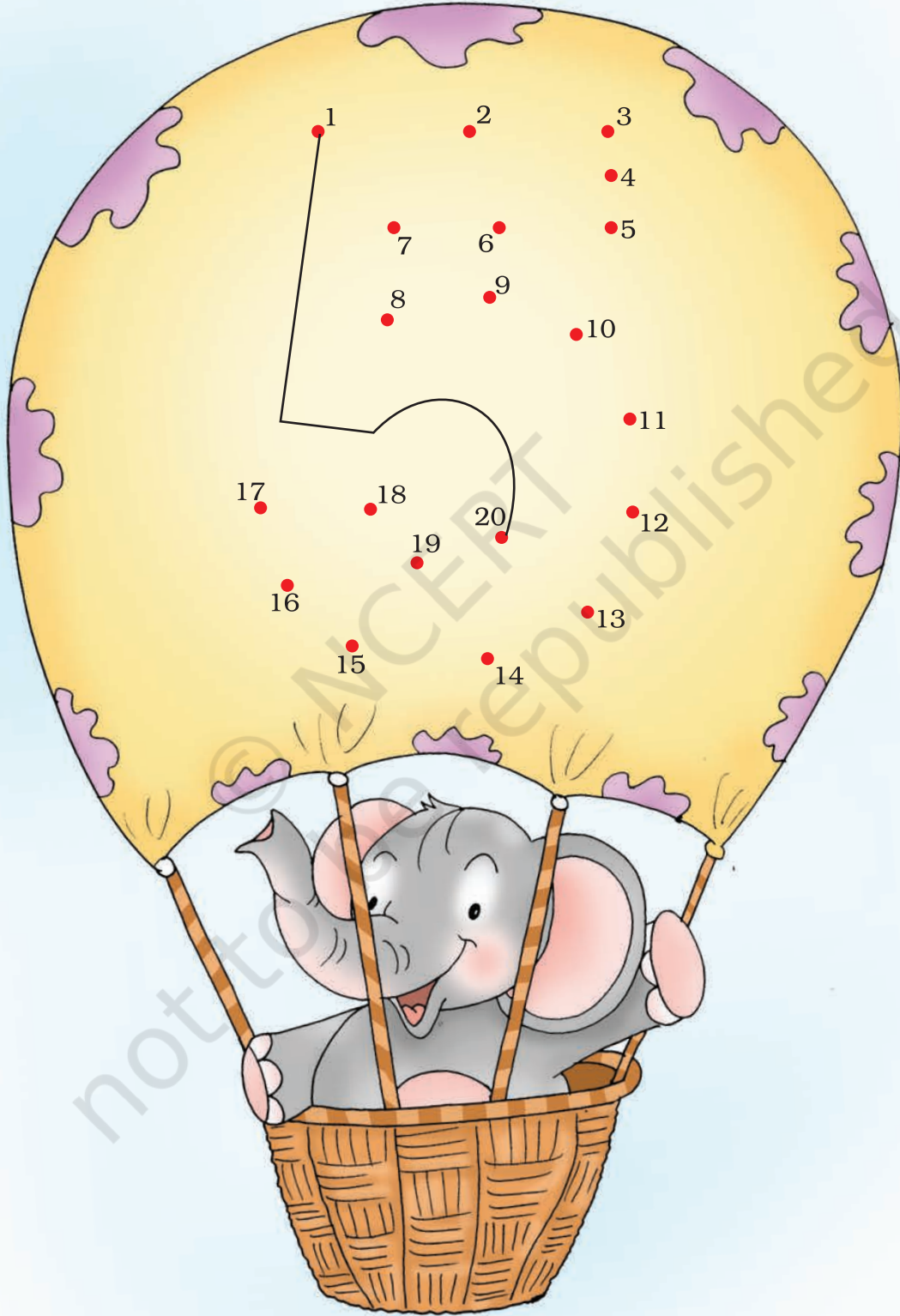
<input type="checkbox"/>	<input type="checkbox"/>

<input type="checkbox"/>	<input type="checkbox"/>


<input type="checkbox"/>	<input type="checkbox"/>



ترتیب سے ملائیے۔




گم شدہ اعداد لکھیے۔



18 کے بعد کیا آتا ہے؟

14 کے بعد کیا آتا ہے؟



16 سے پہلے کیا آتا ہے؟

9 سے پہلے اور بعد کا عدد لکھیے؟



18 سے پہلے اور بعد کا عدد لکھیے؟

10 سے پہلے اور بعد کا عدد لکھیے؟



بڑے عدد پر دائرہ بنائیے۔

11 13

13 15

18 8

12 8

17 7

11 10

16 6

1 11

9 19

چھوٹے عدد پر دائرہ بنائیے۔

20 10

6 4

10 12

11 9

5 15

12 2

16 17

9 10

15 13



سب سے بڑے عدد پر دائرہ بنائیے۔

13 3 9

12 15 20

10 5 12

11 12 13

19 18 17

13 16 14

سب سے چھوٹے عدد پر دائرہ بنائیے۔

7 2 4

14 16 12


15 7 20

19 8 9

1 10 20

16 15 14





$4 + 5 = \square$

$0 + 3 = \square$

$5 + 2 = \square$

$6 + 2 = \square$

$$\begin{array}{r} 6 \\ + 2 \\ \hline \square \end{array}$$

$$\begin{array}{r} 0 \\ + 5 \\ \hline \square \end{array}$$

$$\begin{array}{r} 1 \\ + 7 \\ \hline \square \end{array}$$

$\begin{array}{r} 8 \\ + 6 \\ \hline 14 \end{array}$		$\begin{array}{r} 12 \\ + 5 \\ \hline 17 \end{array}$	
--	--	---	--

$8 + 7 =$

$11 + 15 =$

$9 + 9 =$

$4 + 12 =$

$8 + 5 =$

$13 + 5 =$

$6 + 7 =$

$0 + 14 =$

$$\begin{array}{r} 5 \\ + 9 \\ \hline \end{array}$$

$$\begin{array}{r} 7 \\ + 8 \\ \hline \end{array}$$

$$\begin{array}{r} 5 \\ + 5 \\ \hline \end{array}$$

$$\begin{array}{r} 12 \\ + 7 \\ \hline \end{array}$$

1- راہول کے پاس 8 پینسل ہیں۔ سونو کے پاس 7 پینسل ہیں۔ ان لوگوں کے پاس کتنی پینسل ہیں؟

2- فریدہ نے 4 سیب توڑے۔ سیتا نے 6 سیب توڑے۔ دونوں نے اکٹھے رکھ دیے۔ اب وہاں کتنے سیب ہوئے؟



تفریق



$$7 - 4 = \square$$

$$9 - 8 = \square$$

$$2 - 2 = \square$$

$$6 - 2 = \square$$

$$\begin{array}{r} 8 \\ - 4 \\ \hline \square \end{array}$$

$$\begin{array}{r} 6 \\ - 5 \\ \hline \square \end{array}$$

$$\begin{array}{r} 4 \\ - 0 \\ \hline \square \end{array}$$

$\begin{array}{r} 17 \\ - 5 \\ \hline \square \\ 12 \end{array}$	
--	--

$$15 - 4 = \square$$

$$17 - 2 = \square$$

$$19 - 7 = \square$$

$$12 - 1 = \square$$



$$18 - 8 = \square$$

$$14 - 3 = \square$$

$$17 - 5 = \square$$

$$12 - 4 = \square$$

$$11 - 1 = \square$$

$$13 - 0 = \square$$

$$\begin{array}{r} 17 \\ - 4 \\ \hline \square \end{array}$$

$$\begin{array}{r} 18 \\ - 3 \\ \hline \square \end{array}$$

$$\begin{array}{r} 15 \\ - 5 \\ \hline \square \end{array}$$

$$\begin{array}{r} 19 \\ - 8 \\ \hline \square \end{array}$$

$$\begin{array}{r} 14 \\ - 4 \\ \hline \square \end{array}$$


$$\begin{array}{r} 13 \\ - 6 \\ \hline \square \end{array}$$

1- سوہن کی ماں بازار سے 9 کیلے لائی۔ اس نے اُن میں سے 4 کیلے سوہن کو دیے۔
بتاؤ سوہن کی ماں کے پاس کتنے کیلے بچے؟


2- رحیم کے پاس 8 پھول تھے۔ اس نے 3 پھول ایک برتن میں رکھ دیے۔
بتاؤ اس نے اپنے پاس کتنے پھول رکھے؟


جمع کی مشق۔


$3 + 7 =$ 


$7 + 6 =$ 


$5 + 8 =$ 

$9 + 2 =$ 


$6 + 8 =$ 


$8 + 7 =$ 

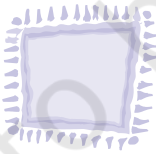
$9 + 9 =$ 


$4 + 8 =$ 


تفریق کی مشق۔


$13 - 7 =$ 


$16 - 6 =$ 

$15 - 3 =$ 

$12 - 0 =$ 

$19 - 6 =$ 

$14 - 3 =$ 

$17 - 4 =$ 

$18 - 7 =$ 