

NAME :- \_\_\_\_\_ SEC \_\_\_\_\_ R NO \_\_\_\_\_ DATE \_\_\_\_\_

**I. Fill in the blanks.**

- 1) Repeated addition is called \_\_\_\_\_.
- 2) A change in the order of the factors does not change the \_\_\_\_\_.
- 3) When you multiply any number by \_\_\_\_\_ the answer is always zero.
- 4)  $5 \times 8 =$  \_\_\_\_\_.
- 5) \_\_\_\_\_  $\times 9 = 0$ .
- 6) \_\_\_\_\_  $\times 7 = 42$ .
- 7)  $9 \times$  \_\_\_\_\_  $= 81$ .
- 8)  $2 \times$  \_\_\_\_\_  $= 2$ .

**II. Write a multiplication fact for the following.**

- 1)  $5 + 5 + 5 + 5 =$  \_\_\_\_\_.
- 2)  $9$  = \_\_\_\_\_.

**III. Write an addition fact for the following.**

- 1)  $8 \times 5 =$  \_\_\_\_\_.
- 2)  $6 \times 6 =$  \_\_\_\_\_.

**IV. Write an addition and a multiplication fact for the following.**

1.   \_\_\_\_\_

2.    \_\_\_\_\_

**V. complete the table.**

	No. of groups	No. in each group	Draw	No. in all
$4 \times 3$				
$2 \times 5$				

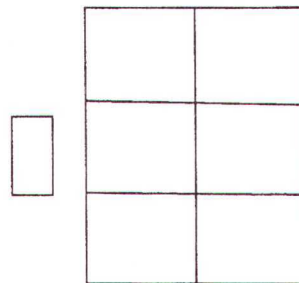
VI. Find the product.

4	5	9
X 2	X 2	X 1
<input style="width: 60px; height: 30px; border: 1px solid black;" type="text"/>	<input style="width: 60px; height: 30px; border: 1px solid black;" type="text"/>	<input style="width: 60px; height: 30px; border: 1px solid black;" type="text"/>

VII) Solve the following word problem.

1. A note book has 12 pages .How many pages are there in 3 note books?

Answer. \_\_\_\_\_.

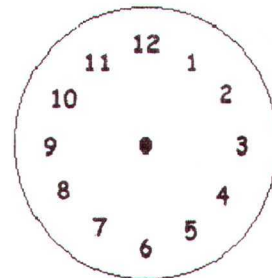
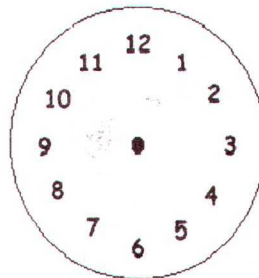
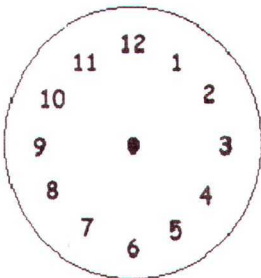


VIII) Draw the hands to show the time.

Half past twelve

10 o' clock

6 o' clock



IX . Write the time in two ways.

